

Skill 2 - 7B: Money

Pennies and Nickels

Directions: Count the coins. Write the total below as you count.



5¢



10¢



11¢



12¢



13¢

= 13¢

1.



___ ¢ ___ ¢ ___ ¢ ___ ¢ ___ ¢ ___ ¢ = ___ ¢

2.



___ ¢ ___ ¢ ___ ¢ ___ ¢ ___ ¢ ___ ¢ = ___ ¢

3.



___ ¢ ___ ¢ ___ ¢ ___ ¢ ___ ¢ ___ ¢ = ___ ¢

4.




___ ¢ ___ ¢ ___ ¢ ___ ¢ ___ ¢ ___ ¢ = ___ ¢

Skill 2 - 7B: Money

Pennies and Nickels


Directions: Count the coins. Write the total below as you count.

5.




_____ ¢ _____ ¢ _____ ¢ _____ ¢ _____ ¢ _____ ¢ = _____ ¢

6.




_____ ¢ _____ ¢ _____ ¢ _____ ¢ _____ ¢ = _____ ¢

7.




_____ ¢ _____ ¢ _____ ¢ _____ ¢ _____ ¢ = _____ ¢

8.



_____ ¢ _____ ¢ _____ ¢ _____ ¢ = _____ ¢

9.



_____ ¢ _____ ¢ _____ ¢ _____ ¢ _____ ¢ _____ ¢ = _____ ¢

Skill 2 - 7B: Money

Pennies and Nickels

Directions: Count the coins. Write the total below as you count.

10.



_____ ¢ _____ ¢ _____ ¢ _____ ¢ _____ ¢



_____ ¢ _____ ¢ _____ ¢ _____ ¢ _____ ¢ = _____ ¢

11.




_____ ¢ _____ ¢ _____ ¢ _____ ¢ _____ ¢ _____ ¢



_____ ¢ _____ ¢ _____ ¢ _____ ¢ _____ ¢ = _____ ¢

12.



_____ ¢ _____ ¢ _____ ¢ _____ ¢ _____ ¢ _____ ¢



_____ ¢ _____ ¢ _____ ¢ _____ ¢ _____ ¢ _____ ¢ = _____ ¢

Skill 2 - 7B: Money

Pennies and Nickels

Directions: Count the coins. Write the total below as you count.

13.



_____ ¢ _____ ¢ _____ ¢ _____ ¢ _____ ¢



_____ ¢ _____ ¢ _____ ¢ _____ ¢ _____ ¢ = _____ ¢

14.



_____ ¢ _____ ¢ _____ ¢ _____ ¢ _____ ¢ _____ ¢



_____ ¢ _____ ¢ _____ ¢ _____ ¢ _____ ¢ = _____ ¢

15.



_____ ¢ _____ ¢ _____ ¢ _____ ¢ _____ ¢ _____ ¢



_____ ¢ _____ ¢ _____ ¢ _____ ¢ _____ ¢ = _____ ¢

Answer Key
Skill 2 - 7B

Page 1

1.

$$\underline{5\text{¢}} \quad \underline{6\text{¢}} \quad \underline{7\text{¢}} \quad \underline{8\text{¢}} \quad \underline{9\text{¢}} \quad \underline{10\text{¢}} = 10\text{¢}$$

2.

$$\underline{5\text{¢}} \quad \underline{10\text{¢}} \quad \underline{15\text{¢}} \quad \underline{16\text{¢}} \quad \underline{17\text{¢}} \quad \underline{18\text{¢}} = 18\text{¢}$$

3.

$$\underline{5\text{¢}} \quad \underline{10\text{¢}} \quad \underline{15\text{¢}} \quad \underline{20\text{¢}} \quad \underline{21\text{¢}} \quad \underline{22\text{¢}} = 22\text{¢}$$

4.

$$\underline{5\text{¢}} \quad \underline{10\text{¢}} \quad \underline{15\text{¢}} \quad \underline{20\text{¢}} \quad \underline{25\text{¢}} \quad \underline{26\text{¢}} = 26\text{¢}$$

Page 2

5.

$$\underline{5\text{¢}} \quad \underline{10\text{¢}} \quad \underline{11\text{¢}} \quad \underline{12\text{¢}} \quad \underline{13\text{¢}} \quad \underline{14\text{¢}} = 14\text{¢}$$

6.

$$\underline{5\text{¢}} \quad \underline{6\text{¢}} \quad \underline{7\text{¢}} \quad \underline{8\text{¢}} \quad \underline{9\text{¢}} = 9\text{¢}$$

7.

$$\underline{5\text{¢}} \quad \underline{10\text{¢}} \quad \underline{15\text{¢}} \quad \underline{20\text{¢}} \quad \underline{25\text{¢}} = 25\text{¢}$$

8.

$$\underline{5\text{¢}} \quad \underline{6\text{¢}} \quad \underline{7\text{¢}} \quad \underline{8\text{¢}} = 8\text{¢}$$

9.

$$\underline{5\text{¢}} \quad \underline{10\text{¢}} \quad \underline{15\text{¢}} \quad \underline{16\text{¢}} \quad \underline{17\text{¢}} \quad \underline{18\text{¢}} = 18\text{¢}$$

Page 3

10.

$$\underline{5\text{¢}} \quad \underline{10\text{¢}} \quad \underline{15\text{¢}} \quad \underline{20\text{¢}} \quad \underline{25\text{¢}} \quad \underline{30\text{¢}} \quad \underline{31\text{¢}} \quad \underline{32\text{¢}} \quad \underline{33\text{¢}} \quad \underline{34\text{¢}} = 34\text{¢}$$

11.

$$\underline{5\text{¢}} \quad \underline{10\text{¢}} \quad \underline{15\text{¢}} \quad \underline{20\text{¢}} \quad \underline{25\text{¢}} \quad \underline{30\text{¢}} \quad \underline{31\text{¢}} \quad \underline{32\text{¢}} \quad \underline{33\text{¢}} \quad \underline{34\text{¢}} \quad \underline{35\text{¢}} = 35\text{¢}$$

12.

$$\underline{5\text{¢}} \quad \underline{10\text{¢}} \quad \underline{15\text{¢}} \quad \underline{20\text{¢}} \quad \underline{25\text{¢}} \quad \underline{30\text{¢}} \quad \underline{35\text{¢}} \quad \underline{40\text{¢}} \quad \underline{41\text{¢}} \quad \underline{42\text{¢}} \quad \underline{43\text{¢}} \quad \underline{44\text{¢}} = 44\text{¢}$$

Page 4

13.

$$\underline{5\text{¢}} \quad \underline{10\text{¢}} \quad \underline{15\text{¢}} \quad \underline{20\text{¢}} \quad \underline{25\text{¢}} \quad \underline{30\text{¢}} \quad \underline{35\text{¢}} \quad \underline{40\text{¢}} \quad \underline{41\text{¢}} \quad \underline{42\text{¢}} = 42\text{¢}$$

14.

$$\underline{5\text{¢}} \quad \underline{10\text{¢}} \quad \underline{15\text{¢}} \quad \underline{20\text{¢}} \quad \underline{21\text{¢}} \quad \underline{22\text{¢}} \quad \underline{23\text{¢}} \quad \underline{24\text{¢}} \quad \underline{25\text{¢}} \quad \underline{26\text{¢}} \quad \underline{27\text{¢}} = 27\text{¢}$$

15.

$$\underline{5\text{¢}} \quad \underline{10\text{¢}} \quad \underline{15\text{¢}} \quad \underline{20\text{¢}} \quad \underline{25\text{¢}} \quad \underline{30\text{¢}} \quad \underline{35\text{¢}} \quad \underline{40\text{¢}} \quad \underline{45\text{¢}} \quad \underline{50\text{¢}} \quad \underline{55\text{¢}} \quad \underline{56\text{¢}} = 56\text{¢}$$