










Skill 2 - 9B: Time

Read a Clock: Time to the Half Hour

Directions: Write the time on the lines below.

1.  <u>7:30</u>	2.  : _____	3.  : _____
--	---	---



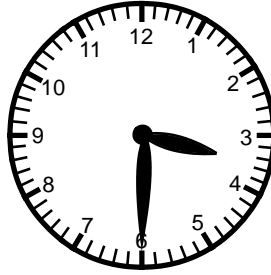
4.  : _____	5.  : _____	6.  : _____
--	--	--




7.  : _____	8.  : _____	9.  : _____
---	---	---




Skill 2 - 9B: Time

Read a Clock: Time to the Half Hour

Directions: Write the time on the lines below.

<p>10.</p>  <p>_____</p>	<p>11.</p>  <p>_____</p>	<p>12.</p>  <p>_____</p>
---	---	---

<p>13.</p>  <p>_____</p>	<p>14.</p>  <p>_____</p>	<p>15.</p>  <p>_____</p>
--	--	--

<p>16.</p>  <p>_____</p>	<p>17.</p>  <p>_____</p>	<p>18.</p>  <p>_____</p>
---	---	---

Skill 2 - 9B: Time

Read a Clock: Time to the Half Hour

Directions: Write the time on the lines below.

19.



:

20.



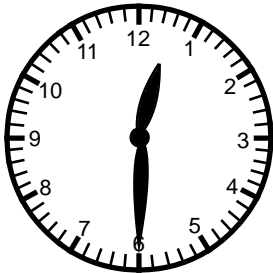
:

21.




:

22.



:

23.



:

24.




:

25.




:

26.



:

27.



:

Skill 2 - 9B: Time

Read a Clock: Time to the Half Hour

Directions: Write the time on the lines below.

28.



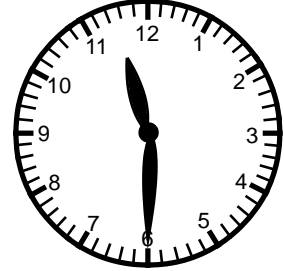
⋮

29.



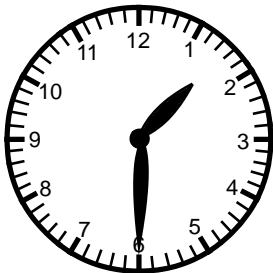
⋮

30.




⋮

31.




⋮

32.




⋮

33.




⋮

34.




⋮

35.



⋮

36.



⋮

Answer Key Skill 2 - 9B

1. 7:30	2. 4:30	3. 10:30
4. 7:30	5. 9:30	6. 3:30
7. 11:30	8. 4:30	9. 1:30

Page 2

10. 2:30	11. 12:30	12. 3:30
13. 7:30	14. 8:30	15. 5:30
16. 9:30	17. 1:30	18. 10:30

Page 3

19. 11:30	20. 4:30	21. 2:30
22. 12:30	23. 5:30	24. 9:30
25. 8:30	26. 7:30	27. 3:30

Page 4

28. 10:30	29. 12:30	30. 11:30
31. 1:30	32. 3:30	33. 7:30
34. 9:30	35. 12:30	36. 2:30