










Name \_\_\_\_\_

Date \_\_\_\_\_

### Skill 2 - 9D: Time

#### Read a Clock: Five Minutes

Directions: Write the time two ways on the lines below.

<p>1.</p>  <p><b>8:05</b></p> <p>_____</p> <p><b>5</b> minutes after <b>8</b></p>	<p>2.</p>  <p>_____</p> <p>_____ minutes after _____</p>	<p>3.</p>  <p>_____</p> <p>_____ minutes after _____</p>
<p>4.</p>  <p>_____</p> <p>_____ minutes after _____</p>	<p>5.</p>  <p>_____</p> <p>_____ minutes after _____</p>	<p>6.</p>  <p>_____</p> <p>_____ minutes after _____</p>
<p>7.</p>  <p>_____</p> <p>_____ minutes after _____</p>	<p>8.</p>  <p>_____</p> <p>_____ minutes after _____</p>	<p>9.</p>  <p>_____</p> <p>_____ minutes after _____</p>


Name \_\_\_\_\_

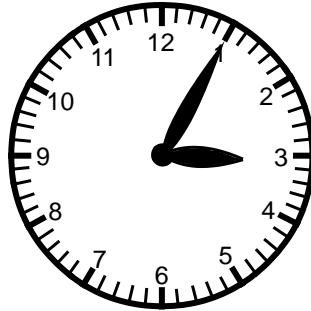
Date \_\_\_\_\_

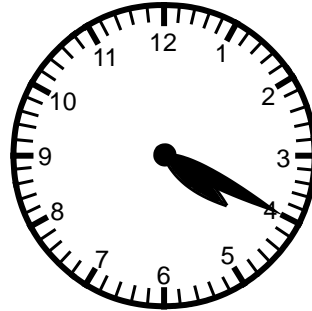
### Skill 2 - 9D: Time


#### Read a Clock: Five Minutes


**Directions:** Write the time two ways on the lines below.


10.   
:   
:   
\_\_\_\_\_ minutes after \_\_\_\_\_

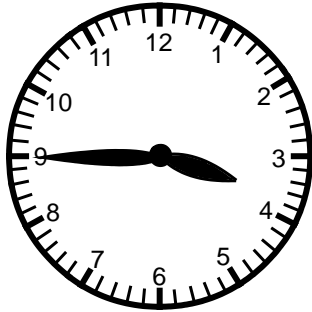
11.   
:   
:   
\_\_\_\_\_ minutes after \_\_\_\_\_

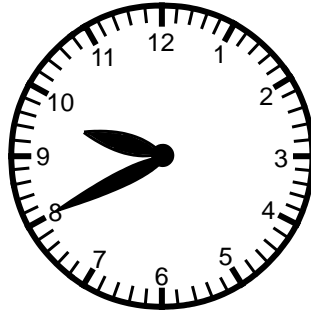
12.   
:   
:   
\_\_\_\_\_ minutes after \_\_\_\_\_


13.   
:   
:   
\_\_\_\_\_ minutes after \_\_\_\_\_

14.   
:   
:   
\_\_\_\_\_ minutes after \_\_\_\_\_

15.   
:   
:   
\_\_\_\_\_ minutes after \_\_\_\_\_

16.   
:   
:   
\_\_\_\_\_ minutes after \_\_\_\_\_

17.   
:   
:   
\_\_\_\_\_ minutes after \_\_\_\_\_

18.   
:   
:   
\_\_\_\_\_ minutes after \_\_\_\_\_

Name \_\_\_\_\_


Date \_\_\_\_\_

### Skill 2 - 9D: Time

#### Read a Clock: Five Minutes

Directions: Write the time two ways on the lines below.


19.



\_\_\_\_\_

\_\_\_\_\_ minutes after \_\_\_\_\_

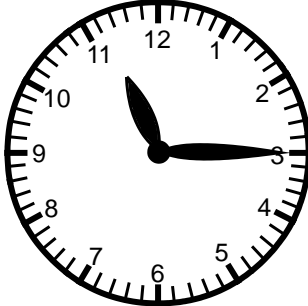
20.



\_\_\_\_\_

\_\_\_\_\_ minutes after \_\_\_\_\_


21.



\_\_\_\_\_

\_\_\_\_\_ minutes after \_\_\_\_\_


22.



\_\_\_\_\_

\_\_\_\_\_ minutes after \_\_\_\_\_


23.



\_\_\_\_\_

\_\_\_\_\_ minutes after \_\_\_\_\_


24.



\_\_\_\_\_

\_\_\_\_\_ minutes after \_\_\_\_\_


25.



\_\_\_\_\_

\_\_\_\_\_ minutes after \_\_\_\_\_

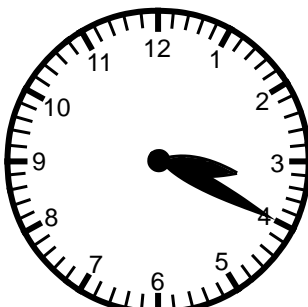
26.



\_\_\_\_\_

\_\_\_\_\_ minutes after \_\_\_\_\_

27.



\_\_\_\_\_

\_\_\_\_\_ minutes after \_\_\_\_\_

Name \_\_\_\_\_


Date \_\_\_\_\_

### Skill 2 - 9D: Time

#### Read a Clock: Five Minutes

**Directions:** Write the time two ways on the lines below.


28.



\_\_\_\_\_

\_\_\_\_\_ minutes after \_\_\_\_\_


29.



\_\_\_\_\_

\_\_\_\_\_ minutes after \_\_\_\_\_


30.



\_\_\_\_\_

\_\_\_\_\_ minutes after \_\_\_\_\_


31.



\_\_\_\_\_

\_\_\_\_\_ minutes after \_\_\_\_\_


32.



\_\_\_\_\_

\_\_\_\_\_ minutes after \_\_\_\_\_


33.



\_\_\_\_\_

\_\_\_\_\_ minutes after \_\_\_\_\_


34.



\_\_\_\_\_

\_\_\_\_\_ minutes after \_\_\_\_\_


35.



\_\_\_\_\_

\_\_\_\_\_ minutes after \_\_\_\_\_

36.



\_\_\_\_\_

\_\_\_\_\_ minutes after \_\_\_\_\_

## Answer Key Skill 2 - 9D

1. $\begin{array}{r} \underline{\quad 8:05 \quad} \\ 5 \quad \text{minutes after} \quad 8 \end{array}$	2. $\begin{array}{r} \underline{\quad 4:10 \quad} \\ 10 \text{ minutes after } 4 \end{array}$	3. $\begin{array}{r} \underline{\quad 8:20 \quad} \\ 20 \text{ minutes after } 8 \end{array}$
4. $\begin{array}{r} \underline{\quad 3:25 \quad} \\ 25 \text{ minutes after } 3 \end{array}$	5. $\begin{array}{r} \underline{\quad 5:55 \quad} \\ 55 \text{ minutes after } 5 \end{array}$	6. $\begin{array}{r} \underline{\quad 12:40 \quad} \\ 40 \text{ minutes after } 12 \end{array}$
7. $\begin{array}{r} \underline{\quad 11:15 \quad} \\ 15 \text{ minutes after } 11 \end{array}$	8. $\begin{array}{r} \underline{\quad 4:35 \quad} \\ 35 \text{ minutes after } 4 \end{array}$	9. $\begin{array}{r} \underline{\quad 7:25 \quad} \\ 25 \text{ minutes after } 7 \end{array}$

### Page 2

10. $\begin{array}{r} \underline{\quad 8:35 \quad} \\ 35 \text{ minutes after } 8 \end{array}$	11. $\begin{array}{r} \underline{\quad 3:05 \quad} \\ 5 \text{ minutes after } 3 \end{array}$	12. $\begin{array}{r} \underline{\quad 4:20 \quad} \\ 20 \text{ minutes after } 4 \end{array}$
13. $\begin{array}{r} \underline{\quad 7:35 \quad} \\ 35 \text{ minutes after } 7 \end{array}$	14. $\begin{array}{r} \underline{\quad 6:20 \quad} \\ 20 \text{ minutes after } 6 \end{array}$	15. $\begin{array}{r} \underline{\quad 3:50 \quad} \\ 50 \text{ minutes after } 3 \end{array}$
16. $\begin{array}{r} \underline{\quad 3:45 \quad} \\ 45 \text{ minutes after } 3 \end{array}$	17. $\begin{array}{r} \underline{\quad 9:40 \quad} \\ 40 \text{ minutes after } 9 \end{array}$	18. $\begin{array}{r} \underline{\quad 1:50 \quad} \\ 50 \text{ minutes after } 1 \end{array}$

### Page 3

19. $\begin{array}{r} \underline{\quad 7:25 \quad} \\ 25 \text{ minutes after } 7 \end{array}$	20. $\begin{array}{r} \underline{\quad 8:05 \quad} \\ 5 \text{ minutes after } 8 \end{array}$	21. $\begin{array}{r} \underline{\quad 11:15 \quad} \\ 15 \text{ minutes after } 11 \end{array}$
22. $\begin{array}{r} \underline{\quad 8:20 \quad} \\ 20 \text{ minutes after } 8 \end{array}$	23. $\begin{array}{r} \underline{\quad 4:10 \quad} \\ 10 \text{ minutes after } 4 \end{array}$	24. $\begin{array}{r} \underline{\quad 3:05 \quad} \\ 5 \text{ minutes after } 3 \end{array}$
25. $\begin{array}{r} \underline{\quad 12:40 \quad} \\ 40 \text{ minutes after } 12 \end{array}$	26. $\begin{array}{r} \underline{\quad 5:55 \quad} \\ 55 \text{ minutes after } 5 \end{array}$	27. $\begin{array}{r} \underline{\quad 3:20 \quad} \\ 20 \text{ minutes after } 3 \end{array}$

### Page 4

28. $\begin{array}{r} \underline{\quad 1:50 \quad} \\ 50 \text{ minutes after } 1 \end{array}$	29. $\begin{array}{r} \underline{\quad 7:35 \quad} \\ 35 \text{ minutes after } 7 \end{array}$	30. $\begin{array}{r} \underline{\quad 4:20 \quad} \\ 20 \text{ minutes after } 4 \end{array}$
31. $\begin{array}{r} \underline{\quad 6:20 \quad} \\ 20 \text{ minutes after } 6 \end{array}$	32. $\begin{array}{r} \underline{\quad 9:35 \quad} \\ 35 \text{ minutes after } 9 \end{array}$	33. $\begin{array}{r} \underline{\quad 4:35 \quad} \\ 35 \text{ minutes after } 4 \end{array}$
34. $\begin{array}{r} \underline{\quad 3:50 \quad} \\ 50 \text{ minutes after } 3 \end{array}$	35. $\begin{array}{r} \underline{\quad 3:45 \quad} \\ 45 \text{ minutes after } 3 \end{array}$	36. $\begin{array}{r} \underline{\quad 9:40 \quad} \\ 40 \text{ minutes after } 9 \end{array}$