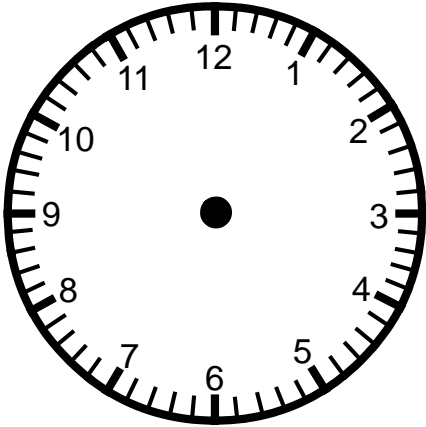


Skill 2 - 9G: Time

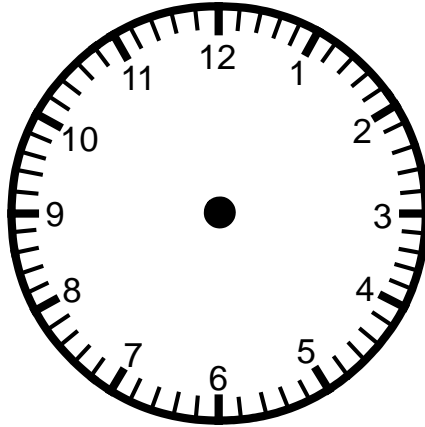
Problem Solving: Using a Model

Directions: Draw hands on the clocks below to match the time in the story. Using the clocks to help solve the problem, write how much time has passed.

1.
Bill begins his math homework at 7:30.
He finishes his work at 8:30.
How much time has passed?



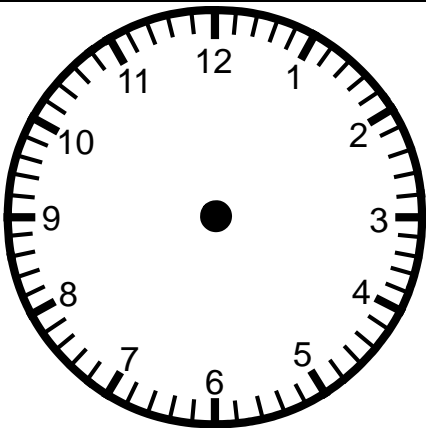
Beginning Time



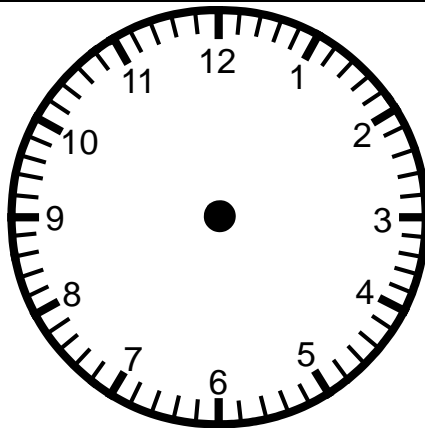
Ending Time

_____ hour(s)

2.
The school play began at 1:10.
The play was over at 1:30.
How much time has passed?



Beginning Time



Ending Time

_____ minutes

Name _____

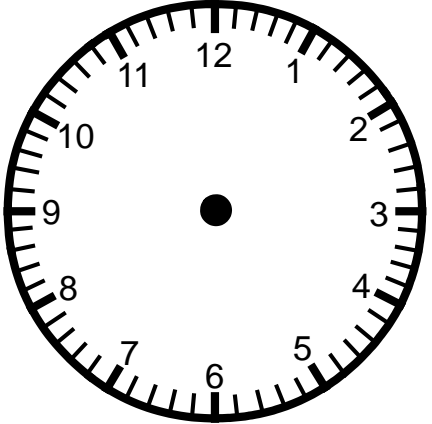
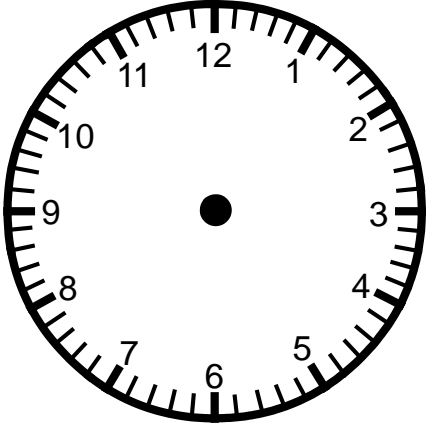
Date _____

Skill 2 - 9G: Time

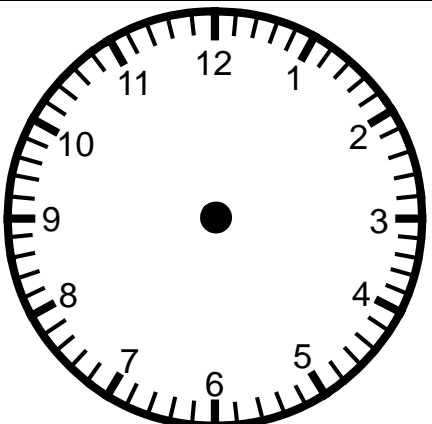
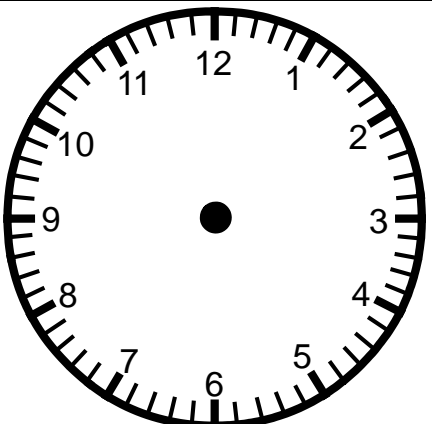
Problem Solving: Using a Model

Directions: Draw hands on the clocks below to match the time in the story. Using the clocks to help solve the problem, write how much time has passed.

3. Emily and a few friends went to the movies. Their movie began at 2:50 and ended at 5:00. How much time has passed?

| | | |
|--|--|---|
|  <p>Beginning Time</p> |  <p>Ending Time</p> | <p>_____ hour(s)</p> <p>_____ minutes</p> |
|--|--|---|

4. Victoria began to read her book at 8:45. She finishes reading at 9:00. How much time has passed?

| | | |
|---|---|----------------------|
|  <p>Beginning Time</p> |  <p>Ending Time</p> | <p>_____ minutes</p> |
|---|---|----------------------|

Name _____

Date _____

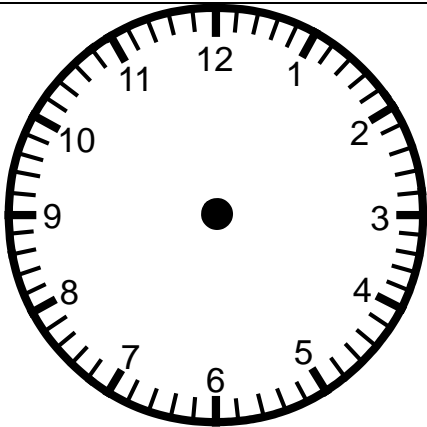
Skill 2 - 9G: Time

Problem Solving: Using a Model

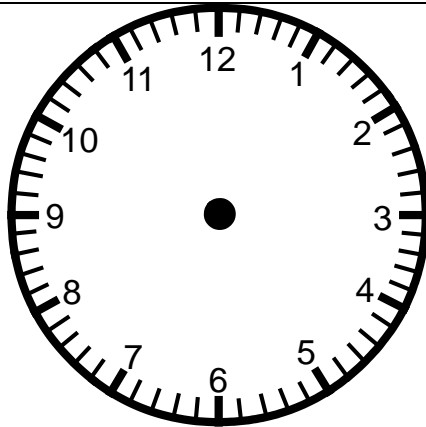
Directions: Draw hands on the clocks below to match the time in the story. Using the clocks to help solve the problem, write how much time has passed.

5.

The elephant at the zoo begins lunch at 2:15 and finishes lunch at 3:00.
How much time has passed?



Beginning Time

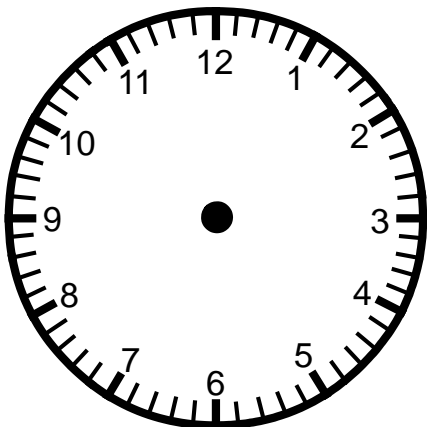


Ending Time

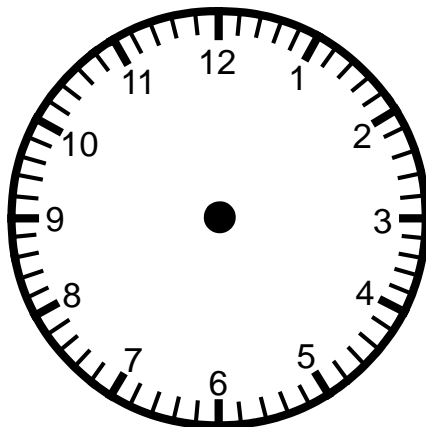
_____ minutes

6.

The tour of the zoo began at 4:00 and ended at 7:00.
How much time has passed?



Beginning Time



Ending Time

_____ hour(s)

Name _____

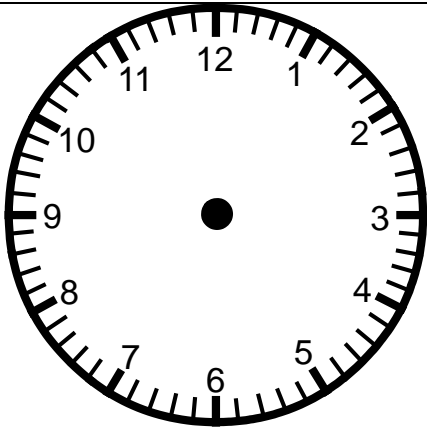
Date _____

Skill 2 - 9G: Time

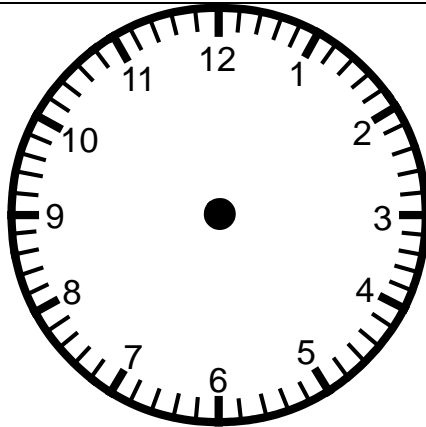
Problem Solving: Using a Model

Directions: Draw hands on the clocks below to match the time in the story. Using the clocks to help solve the problem, write how much time has passed.

7.
The airplane show began at 12:00 and ended at 5:00.
How much time has passed?



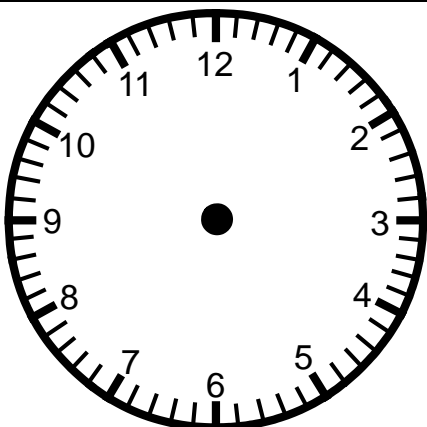
Beginning Time



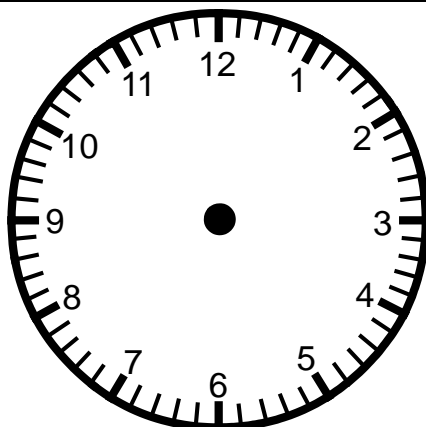
Ending Time

_____ hour(s)

8.
The car show began at 4:15 and ended at 6:30.
How much time has passed?



Beginning Time



Ending Time

_____ hour(s)

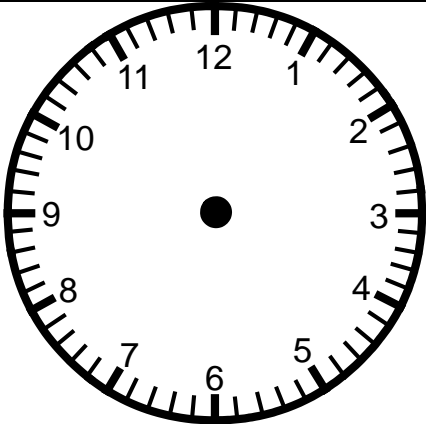
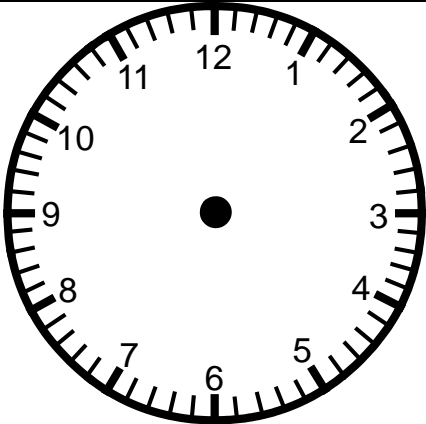
_____ minutes

Skill 2 - 9G: Time

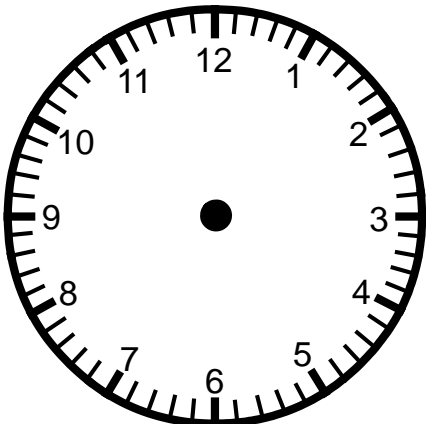
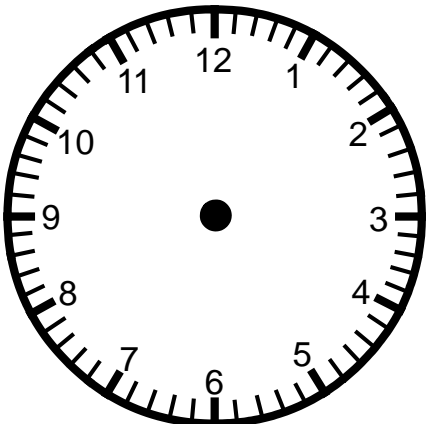
Problem Solving: Using a Model

Directions: Draw hands on the clocks below to match the time in the story. Using the clocks to help solve the problem, write how much time has passed.

9.
Reading class begins at 1:10 each school day.
Reading class ends at 2:05.
How much time has passed?

| | | |
|--|---|---------------|
|  |  | _____ minutes |
| Beginning Time | Ending Time | |

10.
The science fair began at 12:00 and ended at 5:45.
How much time has passed?

| | | |
|---|--|--------------------------------|
|  |  | _____ hour(s) _____ minutes |
| Beginning Time | Ending Time | |

Skill 2 - 9G: Time

Problem Solving: Using a Model

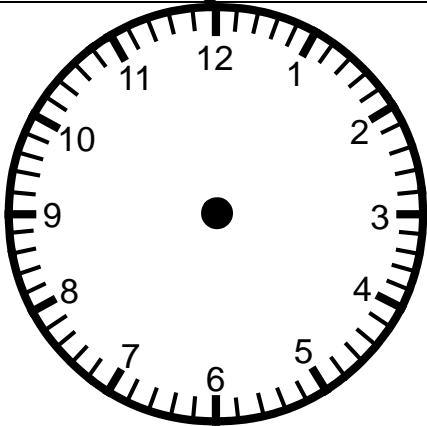
Directions: Draw hands on the clocks below to match the time in the story. Using the clocks to help solve the problem, write how much time has passed.

11.

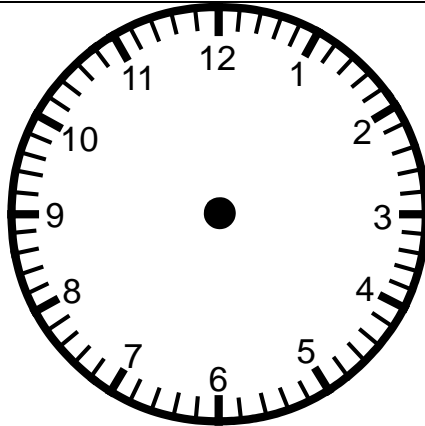
The toy store opens for business at 9:00.

The store closes at 5:00.

How long is the store open?



Beginning Time



Ending Time

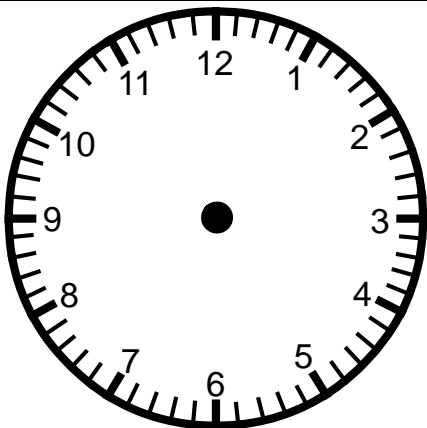
_____ hour(s)

12.

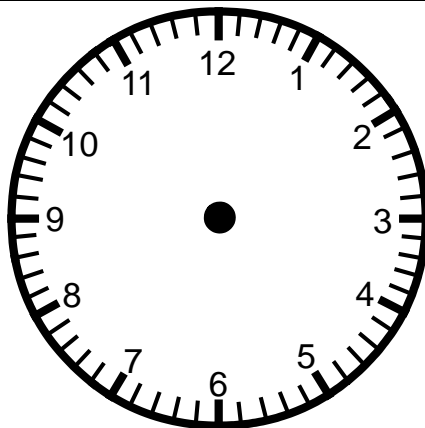
School begins at 7:30.

The school day ends at 2:00.

How long is one day of school?



Beginning Time



Ending Time

_____ hour(s)


_____ minutes

Answer Key
Skill 2 - 9G


1.

Bill begins his math homework at 7:30.
He finishes his work at 8:30.
How much time has passed?

Answer: 1 hour



Beginning Time

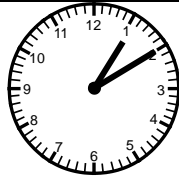


Ending Time

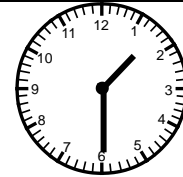
2.

The school play began at 1:10.
The play was over at 1:30.
How much time has passed?

Answer: 20 minutes



Beginning Time




Ending Time

Page 2


3.

Emily and a few friends went to the movies.
Their movie began at 2:50 and ended at 5:00.
How much time has passed?

Answer: 2 hours 10 minutes



Beginning Time

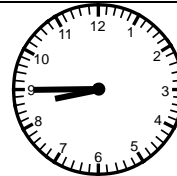


Ending Time

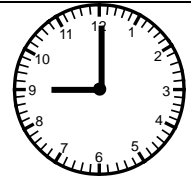
4.

Victoria began to read her book at 8:45.
She finishes reading at 9:00.
How much time has passed?

Answer: 15 minutes



Beginning Time



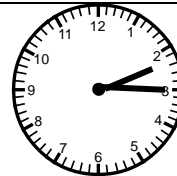
Ending Time

Page 3

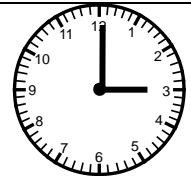
5.

The elephant at the zoo begins lunch at 2:15 and finishes
lunch at 3:00.
How much time has passed?

Answer: 45 minutes



Beginning Time

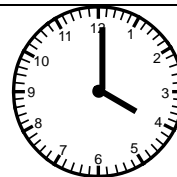


Ending Time


6.

The tour of the zoo began at 4:00 and ended at 7:00.
How much time has passed?

Answer: 3 hours



Beginning Time





Ending Time



Answer Key Skill 2 - 9G

Page 4

7.



| | | |
|--|---|--|
| <p>The airplane show began at 12:00 and ended at 5:00. How much time has passed?</p> <p>Answer: 5 hours</p> |  <p>Beginning Time</p> |  <p>Ending Time</p> |
|--|---|--|

8.



| | | |
|---|---|--|
| <p>The car show began at 4:15 and ended at 6:30. How much time has passed?</p> <p>Answer: 2 hours 15 minutes</p> |  <p>Beginning Time</p> |  <p>Ending Time</p> |
|---|---|--|

Page 5

9.



| | | |
|---|---|--|
| <p>Reading class begins at 1:10 each school day. Reading class ends at 2:05. How much time has passed?</p> <p>Answer: 55 minutes</p> |  <p>Beginning Time</p> |  <p>Ending Time</p> |
|---|---|--|

10.



| | | |
|--|---|--|
| <p>The science fair began at 12:00 and ended at 5:45. How much time has passed?</p> <p>Answer: 5 hours 45 minutes</p> |  <p>Beginning Time</p> |  <p>Ending Time</p> |
|--|---|--|

Page 6

11.

| | | |
|--|---|--|
| <p>The toy store opens for business at 9:00. The store closes at 5:00. How long is the store open?</p> <p>Answer: 8 hours</p> |  <p>Beginning Time</p> |  <p>Ending Time</p> |
|--|---|--|

12.

| | | |
|--|---|--|
| <p>School begins at 7:30. The school day ends at 2:00. How long is one day of school?</p> <p>Answer: 6 hours 30 minutes</p> |  <p>Beginning Time</p> |  <p>Ending Time</p> |
|--|---|--|