

Skill 2 - 17G: Measurement


Inch, Foot, and Yard

Directions: Choose the best measure for each object. Think of real life size objects.

$$1 \text{ foot} = 12 \text{ inches}$$

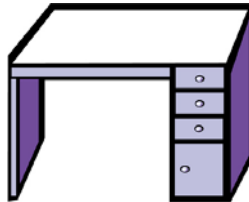
$$1 \text{ yard} = 3 \text{ feet} = 36 \text{ inches}$$

1.



inch or foot

2.




inch or foot

3.




inch or yard

4.



inch or yard

5.



inch or foot

6.



inch or foot

Name _____

Date _____

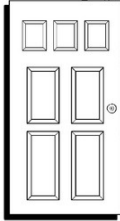
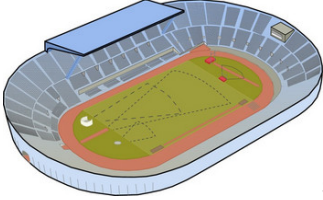

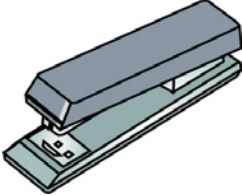


Skill 2 - 17G: Measurement

Inch, Foot, and Yard

Directions: Choose the best measure for each object. Think of real life size objects.

$$1 \text{ foot} = 12 \text{ inches}$$

$$1 \text{ yard} = 3 \text{ feet} = 36 \text{ inches}$$

7.		inch or foot
8.	 <p>sports stadium</p>	foot or yard
9.		inch or yard
10.		inch or foot
11.		inch or foot
12.		inch or foot

Answer Key
Skill 2 - 17G

Directions: Choose the *best* measure for each object.

Page 1

1. inch

2. inch

3. yard

4. yard

5. inch

6. inch

Page 2

7. inch

8. yard

9. yard

10. inch

11. inch

12. foot