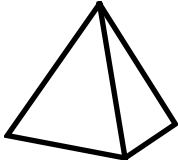

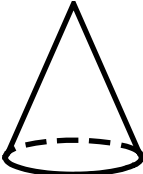




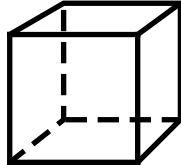
Skill 2 - 19A: Geometry


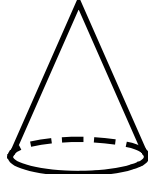
3-Dimensional Figures


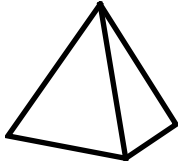
Directions: Circle the name of each 3-dimensional figure.

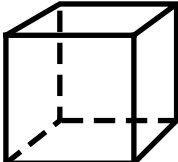

<p>1.</p> <p>pyramid</p> <p>cone</p>		<p>cylinder</p> <p>rectangular prism</p>	<p>2.</p> <p>cone</p> <p>pyramid</p>		<p>rectangular prism</p> <p>sphere</p>
--------------------------------------	---	--	--------------------------------------	---	--

<p>3.</p> <p>pyramid</p> <p>rectangular prism</p>		<p>cube</p> <p>cone</p>	<p>4.</p> <p>pyramid</p> <p>cylinder</p>		<p>cone</p> <p>sphere</p>
---	---	-------------------------	--	---	---------------------------

<p>5.</p> <p>cube</p> <p>cone</p>		<p>sphere</p> <p>cylinder</p>	<p>6.</p> <p>cube</p> <p>cylinder</p>		<p>rectangular prism</p> <p>cone</p>
-----------------------------------	--	-------------------------------	---------------------------------------	--	--------------------------------------

<p>7.</p> <p>pyramid</p> <p>cylinder</p>		<p>cube</p> <p>rectangular prism</p>	<p>8.</p> <p>sphere</p> <p>cube</p>		<p>cone</p> <p>cylinder</p>
--	---	--------------------------------------	-------------------------------------	---	-----------------------------

<p>9.</p> <p>cylinder</p> <p>sphere</p>		<p>cone</p> <p>pyramid</p>	<p>10.</p> <p>rectangular prism</p> <p>cone</p>		<p>pyramid</p> <p>sphere</p>
---	---	----------------------------	---	---	------------------------------

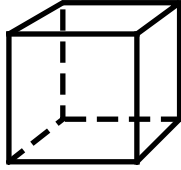
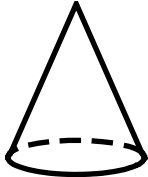
<p>11.</p> <p>sphere</p> <p>cone</p>		<p>cube</p> <p>pyramid</p>	<p>12.</p> <p>cone</p> <p>cylinder</p>		<p>rectangular prism</p> <p>sphere</p>
--------------------------------------	---	----------------------------	--	---	--

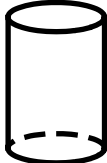

Name _____ Date _____

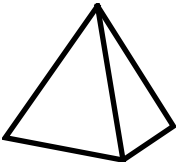

Skill 2 - 19A: Geometry

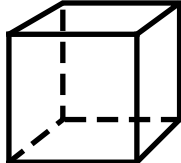

3-Dimensional Figures


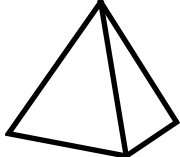
Directions: Circle the name of each 3-dimensional figure.

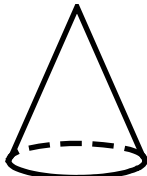

13. cube cone		cylinder rectangular prism	14. cone pyramid		rectangular prism cylinder
--------------------------------	---	-----------------------------------	-----------------------------------	---	-----------------------------------

15. pyramid cone		cylinder pyramid	16. cube cylinder		cone sphere
-----------------------------------	---	-------------------------	------------------------------------	---	--------------------

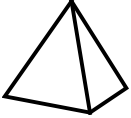




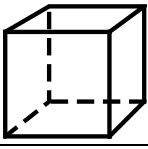



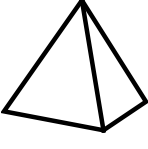
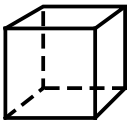

17. cube pyramid		sphere cylinder	18. pyramid cylinder		rectangular prism cone
-----------------------------------	--	------------------------	---------------------------------------	--	-------------------------------

19. pyramid cylinder		sphere cube	20. sphere cube		cone cylinder
---------------------------------------	---	--------------------	----------------------------------	---	----------------------

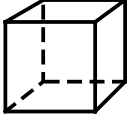

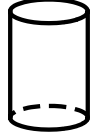

21. cylinder rectangular prism		cone pyramid	22. pyramid cone		cube sphere
---	---	---------------------	-----------------------------------	---	--------------------

23. sphere cone		cylinder pyramid	24. cone cylinder		rectangular prism sphere
----------------------------------	---	-------------------------	------------------------------------	---	---------------------------------

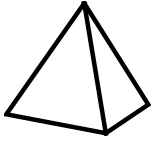

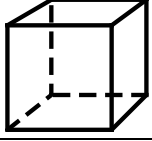


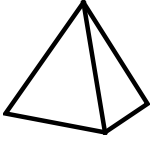


Answer Key
Skill 2 - 19A

1. pyramid cone		cylinder rectangular prism	2. cone pyramid		rectangular prism sphere
3. pyramid rectangular prism		cube cone	4. pyramid cylinder		cone sphere
5. cube cone		sphere cylinder	6. cube cylinder		rectangular prism cone
7. pyramid cylinder		cube rectangular prism	8. sphere cube		cone cylinder
9. cylinder sphere		cone pyramid	10. rectangular prism cone		pyramid sphere
11. sphere cone		cube pyramid	12. cone cylinder		rectangular prism sphere

Page 2

13. cube cone		cylinder rectangular prism	14. cone pyramid		rectangular prism cylinder
15. pyramid cone		cylinder pyramid	16. cube cylinder		cone sphere

Answer Key
Skill 2 - 19A

<p>17.</p> <p>cube</p> <p>pyramid</p>  <p>sphere</p> <p>cylinder</p>	<p>18.</p> <p>pyramid</p> <p>cylinder</p>  <p>rectangular prism</p> <p>cone</p>
<p>19.</p> <p>pyramid</p> <p>cylinder</p>  <p>sphere</p> <p>cube</p>	<p>20.</p> <p>sphere</p> <p>cube</p>  <p>cone</p> <p>cylinder</p>
<p>21.</p> <p>cylinder</p> <p>rectangular prism</p>  <p>cone</p> <p>pyramid</p>	<p>22.</p> <p>pyramid</p> <p>cone</p>  <p>cube</p> <p>sphere</p>
<p>23.</p> <p>sphere</p> <p>cone</p>  <p>cylinder</p> <p>pyramid</p>	<p>24.</p> <p>cone</p> <p>cylinder</p>  <p>rectangular prism</p> <p>sphere</p>

Copyright © FreeMathProgram.com All rights reserved.