

Skill 2 -19B: Geometry

3-Dimensional Figures

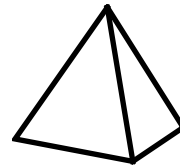
Directions: Write the name of each 3-dimensional figure.

cube, pyramid, rectangular prism, cylinder, cone, sphere

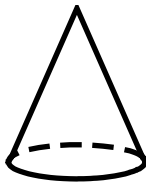
1.



2.



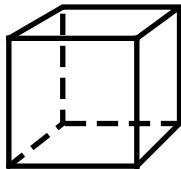
3.



4.



5.



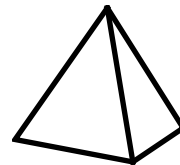
6.



7.



8.



Name _____

Date _____

Skill 2 -19B: Geometry

3-Dimensional Figures

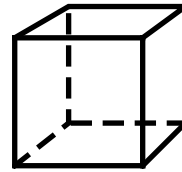
Directions: Write the name of each 3-dimensional figure.

cube, pyramid, rectangular prism, cylinder, cone, sphere

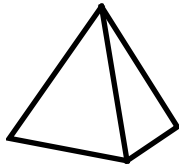
9.



10.



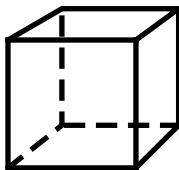
11.



12.



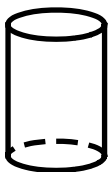
13.



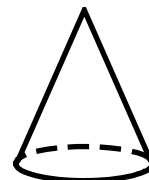
14.




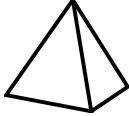
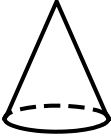

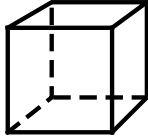


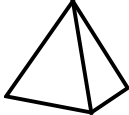
15.




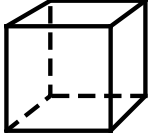
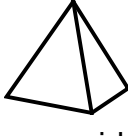

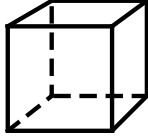



16.



Answer Key
Skill 2 -19B

1.  <u>rectangular prism</u>	2.  <u>pyramid</u>
3.  <u>cone</u>	4.  <u>cylinder</u>
5.  <u>cube</u>	6.  <u>sphere</u>
7.  <u>rectangular prism</u>	8.  <u>pyramid</u>

Page 2

9.  <u>sphere</u>	10.  <u>cube</u>
11.  <u>pyramid</u>	12.  <u>cylinder</u>
13.  <u>cube</u>	14.  <u>rectangular prism</u>
15.  <u>cylinder</u>	16.  <u>cone</u>