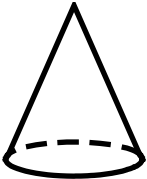
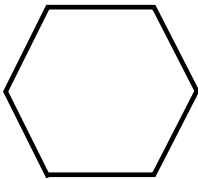
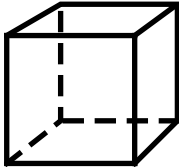



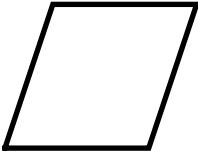

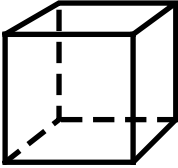


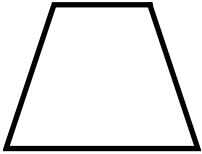
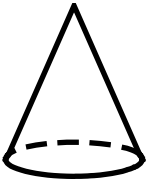

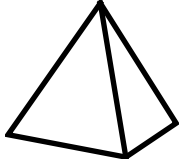
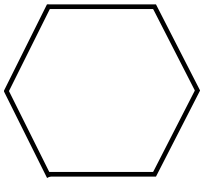
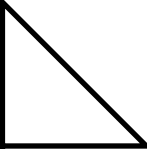


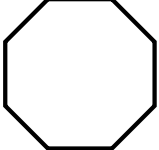
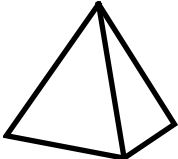
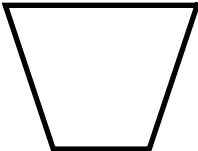




Skill 2 -19C: Geometry

2-Dimensional Shapes

Directions: Circle each 2-dimensional shape. Do not circle the 3-dimensional shapes.

FreeMathProgram.com

1. 	2. 	3. 	4. 
5. 	6. 	7. 	8. 
9. 	10. 	11. 	12. 
13. 	14. 	15. 	16. 
17. 	18. 	19. 	20. 
21. 	22. 	23. 	24. 



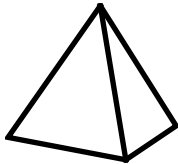
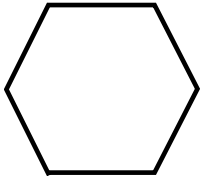
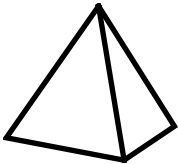
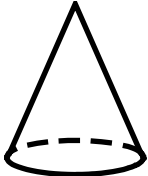


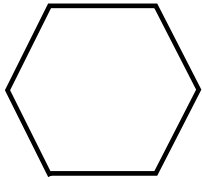

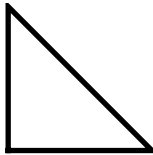
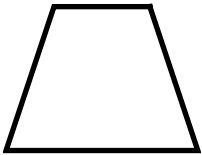
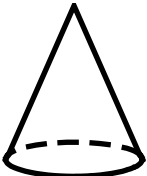
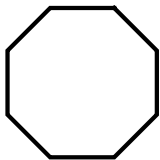
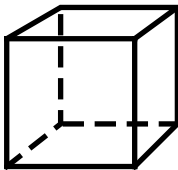




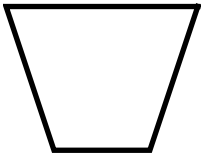
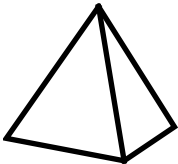



Name _____ Date _____

Skill 2 -19C: Geometry

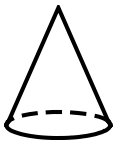
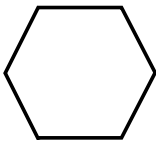
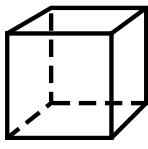



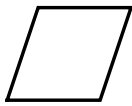

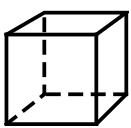


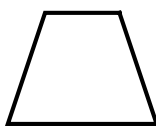
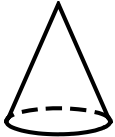

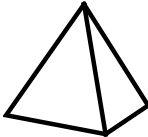
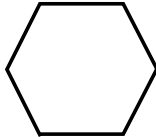
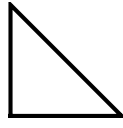

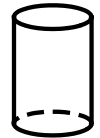
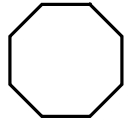
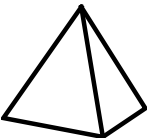
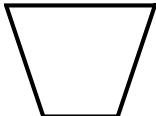


2-Dimensional Shapes

Directions: Circle each 2-dimensional shape. Do not circle the 3-dimensional shapes.

FreeMathProgram.com



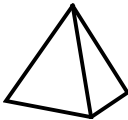
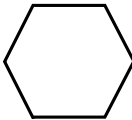
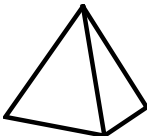



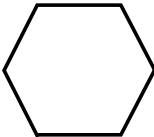

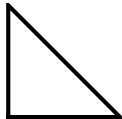
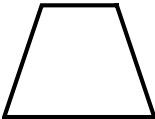

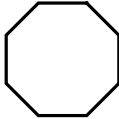
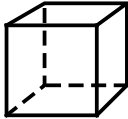




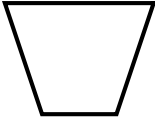
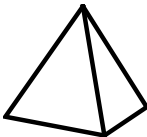
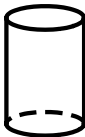

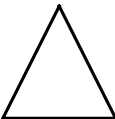
25. 	26. 	27. 	28. 
29. 	30. 	31. 	32. 
33. 	34. 	35. 	36. 
37. 	38. 	39. 	40. 
41. 	42. 	43. 	44. 
45. 	46. 	47. 	48. 

Answer Key
Skill 2 -19C: Geometry
FreeMathProgram.com

1.  A cone is a 3-dimensional shape.	2.  2-dimensional	3.  A cube is a 3-dimensional shape.	4.  2-dimensional
5.  A rectangular prism is a 3-dimensional shape.	6.  2-dimensional	7.  2-dimensional	8.  A sphere is a 3-dimensional shape.
9.  A cube is a 3-dimensional shape.	10.  A cylinder is a 3-dimensional shape.	11.  2-dimensional	12.  2-dimensional
13.  A cone is a 3-dimensional shape.	14.  2-dimensional	15.  A pyramid is a 3-dimensional shape.	16.  2-dimensional
17.  2-dimensional	18.  A sphere is a 3-dimensional shape.	19.  A cylinder is a 3-dimensional shape.	20.  2-dimensional
21.  A pyramid is a 3-dimensional shape.	22.  2-dimensional	23.  A rectangular prism is a 3-dimensional shape.	24.  2-dimensional

Answer Key
Skill 2 -19C: Geometry
FreeMathProgram.com

Page 2 Answer Key

25.  2-dimensional	26.  A sphere is a 3-dimensional shape.	27.  A pyramid is a 3-dimensional shape.	28.  2-dimensional
29.  A pyramid is a 3-dimensional shape.	30.  A cone is a 3-dimensional shape.	31.  A rectangular prism is a 3-dimensional shape.	32.  2-dimensional
33.  2-dimensional	34.  A cylinder is a 3-dimensional shape.	35.  2-dimensional	36.  2-dimensional
37.  A cone is a 3-dimensional shape.	38.  2-dimensional	39.  A cube is a 3-dimensional shape.	40.  A cylinder is a 3-dimensional shape.
41.  2-dimensional	42.  2-dimensional	43.  2-dimensional	44.  2-dimensional
45.  A pyramid is a 3-dimensional shape.	46.  A cylinder is a 3-dimensional shape.	47.  A rectangular prism is a 3-dimensional shape.	48.  2-dimensional