

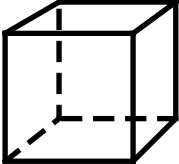


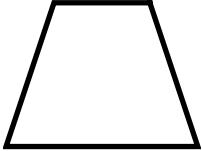
Name \_\_\_\_\_ Date \_\_\_\_\_

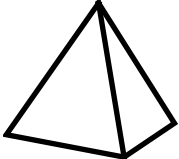


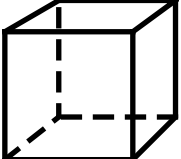
### Skill 2 - 19D: Geometry

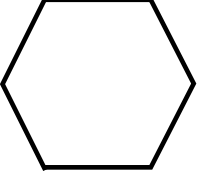
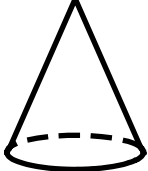
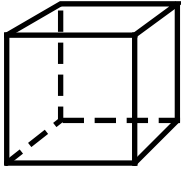

#### 3-Dimensional Shapes

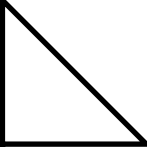

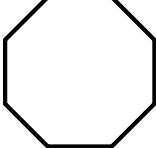
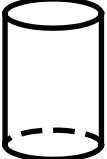
**Directions:** Circle each 3-dimensional shape. Do not circle the 2-dimensional shapes.




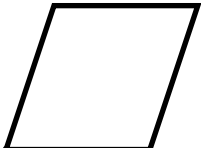
FreeMathProgram.com

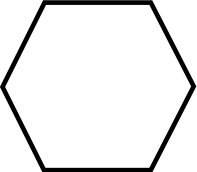
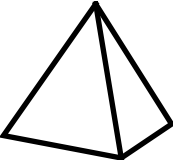

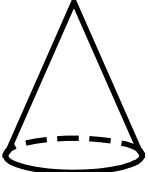
1. 	2. 	3. 	4. 
--	--	---	--

5. 	6. 	7. 	8. 
--	--	---	--

9. 	10. 	11. 	12. 
---	--	---	--

13. 	14. 	15. 	16. 
---	---	--	---

17. 	18. 	19. 	20. 
---	---	--	---

21. 	22. 	23. 	24. 
---	---	--	---

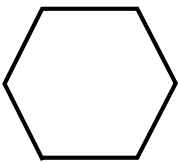
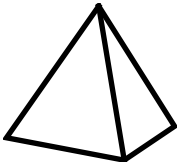

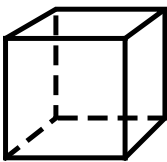
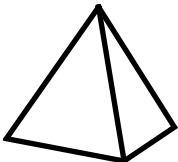



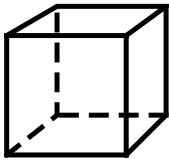
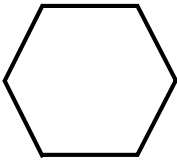

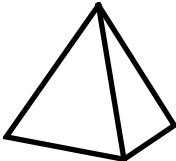
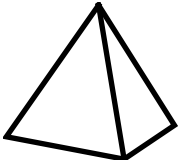

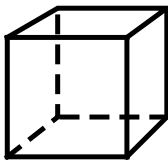


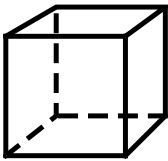
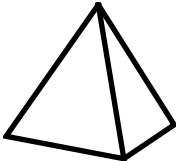

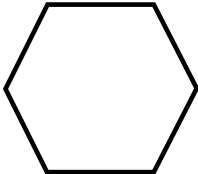

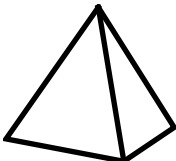

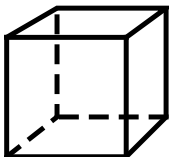


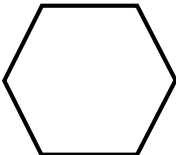
Name \_\_\_\_\_ Date \_\_\_\_\_

### Skill 2 - 19D: Geometry

#### 3-Dimensional Shapes

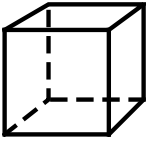


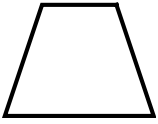
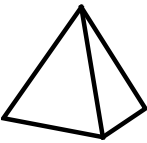


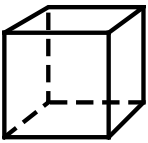
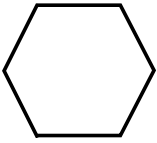

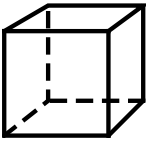

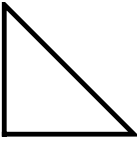

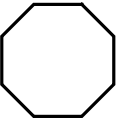





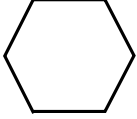
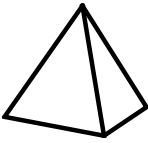

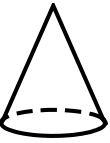
**Directions:** Circle each 3-dimensional shape. Do not circle the 2-dimensional shapes.

FreeMathProgram.com

25. 	26. 	27. 	28. 
29. 	30. 	31. 	32. 
33. 	34. 	35. 	36. 
37. 	38. 	39. 	40. 
41. 	42. 	43. 	44. 
45. 	46. 	47. 	48. 
49. 	50. 	51. 	52. 

Answer Key  
Skill 2 - 19D

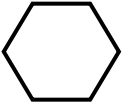


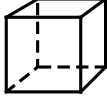




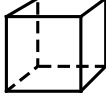
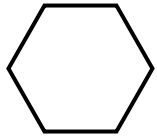




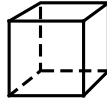


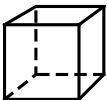


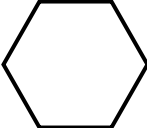

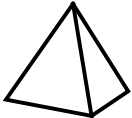

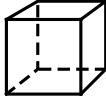


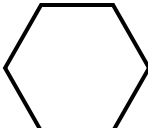
FreeMathProgram.com

1.  3-dimensional	2.  2-dimensional	3.  3-dimensional	4.  2-dimensional
5.  3-dimensional	6.  2-dimensional	7.  2-dimensional	8.  3-dimensional
9.  2-dimensional	10.  3-dimensional	11.  3-dimensional	12.  2-dimensional
13.  2-dimensional	14.  3-dimensional	15.  2-dimensional	16.  3-dimensional
17.  3-dimensional	18.  2-dimensional	19.  3-dimensional	20.  2-dimensional
21.  2-dimensional	22.  3-dimensional	23.  2-dimensional	24.  3-dimensional

Answer Key  
Skill 2 - 19D

FreeMathProgram.com

Page 2: Answer Key

25.  2-dimensional	26.  3-dimensional	27.  2-dimensional	28.  3-dimensional
29.  3-dimensional	30.  2-dimensional	31.  3-dimensional	32.  2-dimensional
33.  3-dimensional	34.  2-dimensional	35.  3-dimensional	36.  3-dimensional
37.  3-dimensional	38.  2-dimensional	39.  3-dimensional	40.  3-dimensional
41.  3-dimensional	42.  3-dimensional	43.  3-dimensional	44.  2-dimensional
45.  2-dimensional	46.  2-dimensional	47.  3-dimensional	48.  2-dimensional
49.  3-dimensional	50.  3-dimensional	51.  3-dimensional	52.  2-dimensional