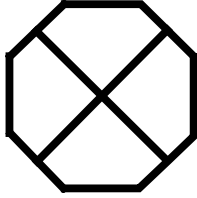
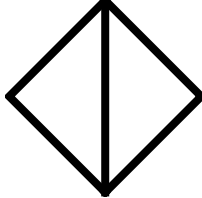
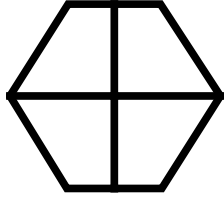






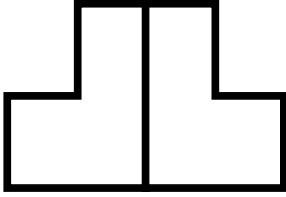

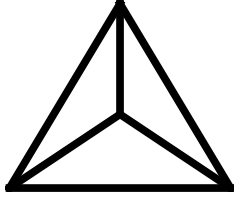


Fractions

Skill 2 - 25G

Color One Part and Identify

Directions: Color one part of the shape. Circle the fraction that matches the colored part.

<p>1.</p>  <p>$\frac{1}{4}$ $\frac{1}{3}$ $\frac{1}{2}$</p>	<p>2.</p>  <p>$\frac{1}{4}$ $\frac{1}{3}$ $\frac{1}{2}$</p>	<p>3.</p>  <p>$\frac{1}{4}$ $\frac{1}{3}$ $\frac{1}{2}$</p>
<p>4.</p>  <p>$\frac{1}{4}$ $\frac{1}{3}$ $\frac{1}{2}$</p>	<p>5.</p>  <p>$\frac{1}{4}$ $\frac{1}{3}$ $\frac{1}{2}$</p>	<p>6.</p>  <p>$\frac{1}{4}$ $\frac{1}{3}$ $\frac{1}{2}$</p>
<p>7.</p>  <p>$\frac{1}{4}$ $\frac{1}{3}$ $\frac{1}{2}$</p>	<p>8.</p>  <p>$\frac{1}{4}$ $\frac{1}{3}$ $\frac{1}{2}$</p>	<p>9.</p>  <p>$\frac{1}{4}$ $\frac{1}{3}$ $\frac{1}{2}$</p>
<p>10.</p>  <p>$\frac{1}{4}$ $\frac{1}{3}$ $\frac{1}{2}$</p>	<p>11.</p>  <p>$\frac{1}{4}$ $\frac{1}{3}$ $\frac{1}{2}$</p>	<p>12.</p>  <p>$\frac{1}{4}$ $\frac{1}{3}$ $\frac{1}{2}$</p>

Name _____

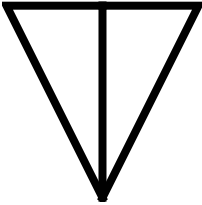
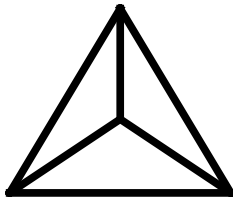
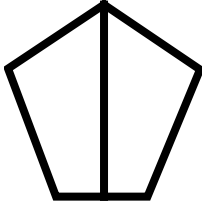


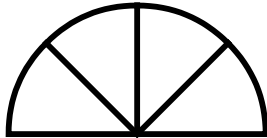
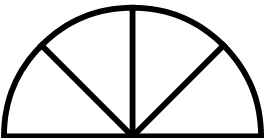

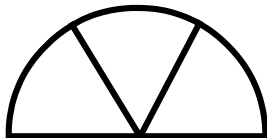
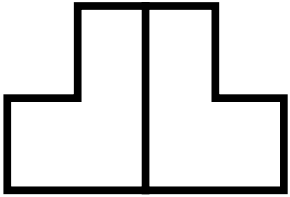


Date _____

Fractions

Skill 2 - 25G

Color One Part and Identify

Directions: Color one part of the shape. Circle the fraction that matches the colored part.

<p>13.</p>  <p>$\frac{1}{4}$ $\frac{1}{3}$ $\frac{1}{2}$</p>	<p>14.</p>  <p>$\frac{1}{4}$ $\frac{1}{3}$ $\frac{1}{2}$</p>	<p>15.</p>  <p>$\frac{1}{4}$ $\frac{1}{3}$ $\frac{1}{2}$</p>
<p>16.</p>  <p>$\frac{1}{4}$ $\frac{1}{3}$ $\frac{1}{2}$</p>	<p>17.</p>  <p>$\frac{1}{4}$ $\frac{1}{3}$ $\frac{1}{2}$</p>	<p>18.</p>  <p>$\frac{1}{4}$ $\frac{1}{3}$ $\frac{1}{2}$</p>
<p>19.</p>  <p>$\frac{1}{4}$ $\frac{1}{3}$ $\frac{1}{2}$</p>	<p>20.</p>  <p>$\frac{1}{4}$ $\frac{1}{3}$ $\frac{1}{2}$</p>	<p>21.</p>  <p>$\frac{1}{4}$ $\frac{1}{3}$ $\frac{1}{2}$</p>
<p>22.</p>  <p>$\frac{1}{4}$ $\frac{1}{3}$ $\frac{1}{2}$</p>	<p>23.</p>  <p>$\frac{1}{4}$ $\frac{1}{3}$ $\frac{1}{2}$</p>	<p>24.</p>  <p>$\frac{1}{4}$ $\frac{1}{3}$ $\frac{1}{2}$</p>

Name _____

Date _____


Fractions

Skill 2 - 25G

Color One Part and Identify


Directions: Color one part of the shape. Circle the fraction that matches the colored part.

25.




$\frac{1}{4}$ $\frac{1}{3}$ $\frac{1}{2}$

26.




$\frac{1}{4}$ $\frac{1}{3}$ $\frac{1}{2}$

27.



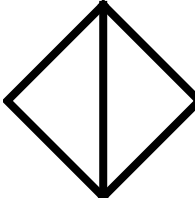
$\frac{1}{4}$ $\frac{1}{3}$ $\frac{1}{2}$

28.



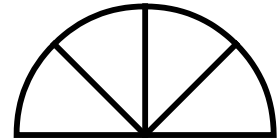
$\frac{1}{4}$ $\frac{1}{3}$ $\frac{1}{2}$

29.



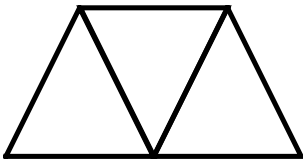
$\frac{1}{4}$ $\frac{1}{3}$ $\frac{1}{2}$

30.



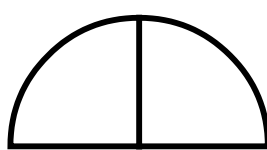
$\frac{1}{4}$ $\frac{1}{3}$ $\frac{1}{2}$

31.




$\frac{1}{4}$ $\frac{1}{3}$ $\frac{1}{2}$

32.



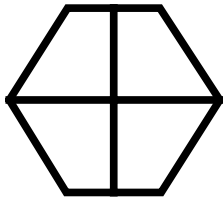
$\frac{1}{4}$ $\frac{1}{3}$ $\frac{1}{2}$

33.



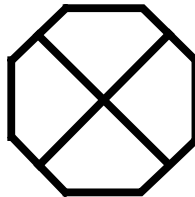
$\frac{1}{4}$ $\frac{1}{3}$ $\frac{1}{2}$

34.



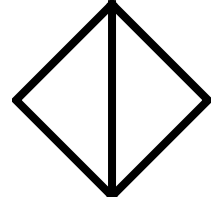
$\frac{1}{4}$ $\frac{1}{3}$ $\frac{1}{2}$

35.


































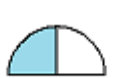




$\frac{1}{4}$ $\frac{1}{3}$ $\frac{1}{2}$

36.



$\frac{1}{4}$ $\frac{1}{3}$ $\frac{1}{2}$

Answer Key
Skill 2 - 25G

1.  $\frac{1}{4}$	2.  $\frac{1}{2}$	3.  $\frac{1}{4}$	4.  $\frac{1}{3}$	5.  $\frac{1}{3}$	6.  $\frac{1}{2}$
7.  $\frac{1}{3}$	8.  $\frac{1}{4}$	9.  $\frac{1}{4}$	10.  $\frac{1}{2}$	11.  $\frac{1}{2}$	12.  $\frac{1}{3}$
13.  $\frac{1}{2}$	14.  $\frac{1}{3}$	15.  $\frac{1}{2}$	16.  $\frac{1}{2}$	17.  $\frac{1}{2}$	18.  $\frac{1}{4}$
19.  $\frac{1}{4}$	20.  $\frac{1}{4}$	21.  $\frac{1}{3}$	22.  $\frac{1}{2}$	23.  $\frac{1}{3}$	24.  $\frac{1}{4}$
25.  $\frac{1}{4}$	26.  $\frac{1}{2}$	27.  $\frac{1}{3}$	28.  $\frac{1}{2}$	29.  $\frac{1}{2}$	30.  $\frac{1}{4}$
31.  $\frac{1}{3}$	32.  $\frac{1}{2}$	33.  $\frac{1}{3}$	34.  $\frac{1}{4}$	35.  $\frac{1}{4}$	36.  $\frac{1}{2}$

Copyright © FreeMathProgram.com All rights reserved.