

Place Value

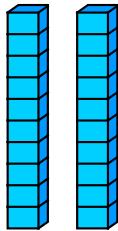

Skill 3 - 01C

Print in black and white or color.

Hundreds, Tens and Ones: 3-Digit Numbers

Directions: Count the hundreds, tens and ones. Write each 3-digit number as hundreds, tens and ones and in standard form. The first one is done for you as an example.

1.




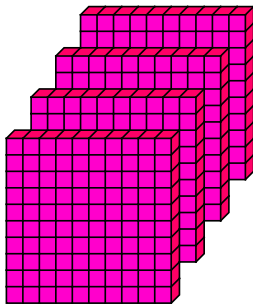
Hundreds	Tens	Ones
1	2	3

=

Standard Form
123

Write the number that matches the model.

2.



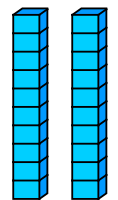
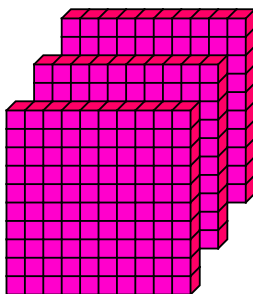
Hundreds	Tens	Ones

=

Standard Form

Write the number that matches the model.

3.



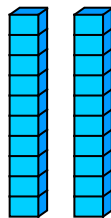
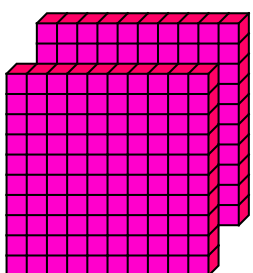
Hundreds	Tens	Ones

=

Standard Form

Write the number that matches the model.

4.



Hundreds	Tens	Ones

=

Standard Form

Write the number that matches the model.


Place Value

Skill 3 - 01C

Hundreds, Tens and Ones: 3-Digit Numbers

Directions: Count the hundreds, tens and ones. Write each 3-digit number as hundreds, tens and ones and in standard form.

5.

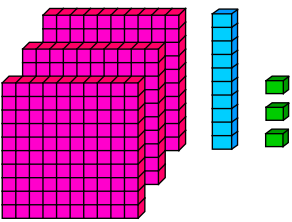


Hundreds	Tens	Ones

=	Standard Form

Write the number that matches the model.

6.




Hundreds	Tens	Ones

=	Standard Form

Write the number that matches the model.

7.




Hundreds	Tens	Ones

=	Standard Form

Write the number that matches the model.

8.



Hundreds	Tens	Ones

=	Standard Form

Write the number that matches the model.

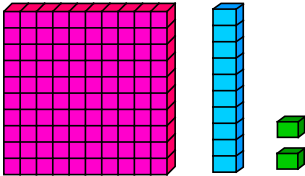
Place Value

Skill 3 - 01C

Hundreds, Tens and Ones: 3-Digit Numbers

Directions: Count the hundreds, tens and ones. Write each 3-digit number as hundreds, tens and ones and in standard form.

9.

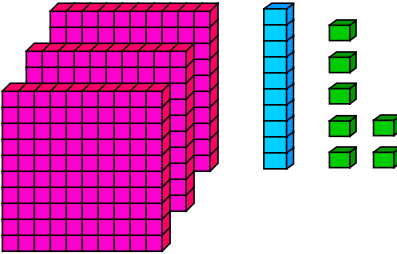


Hundreds	Tens	Ones

Standard Form

Write the number that matches the model.

10.

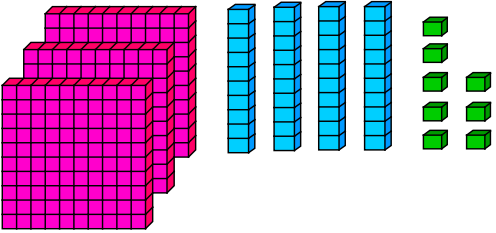


Hundreds	Tens	Ones

Standard Form

Write the number that matches the model.

11.

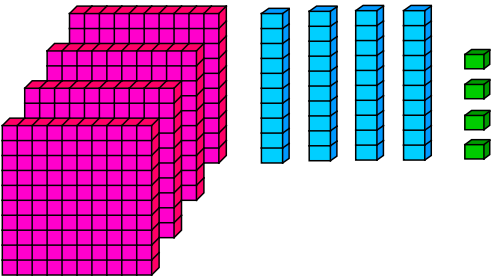


Hundreds	Tens	Ones

Standard Form

Write the number that matches the model.

12.



Hundreds	Tens	Ones

Standard Form

Write the number that matches the model.

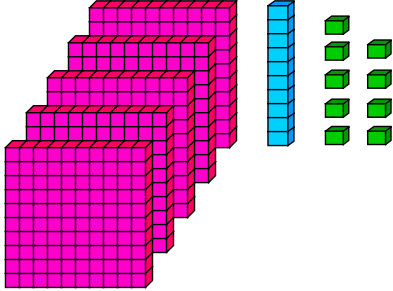
Place Value

Skill 3 - 01C

Hundreds, Tens and Ones: 3-Digit Numbers

Directions: Count the hundreds, tens and ones. Write each 3-digit number as hundreds, tens and ones and in standard form.

13.



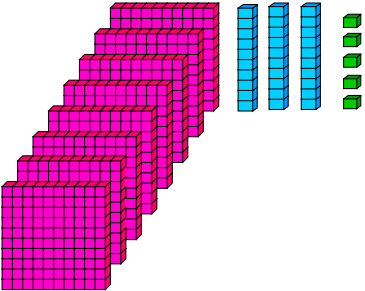
Hundreds	Tens	Ones

=

Standard Form

Write the number that matches the model.

14.



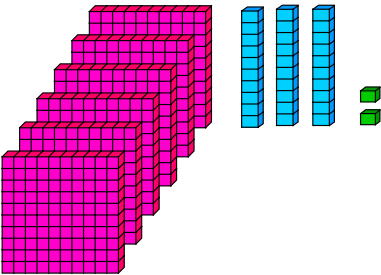
Hundreds	Tens	Ones

=

Standard Form

Write the number that matches the model.

15.



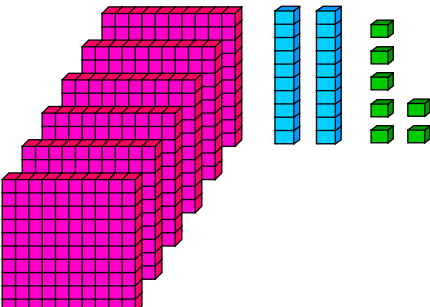
Hundreds	Tens	Ones

=

Standard Form

Write the number that matches the model.

16.



Hundreds	Tens	Ones

=

Standard Form

Write the number that matches the model.

Answer Key
Skill 3 - 01C

1.

Hundreds	Tens	Ones	=	Standard Form
1	2	3	=	123

2.

Hundreds	Tens	Ones	=	Standard Form
4	3	3	=	433

3.

Hundreds	Tens	Ones	=	Standard Form
3	2	4	=	324

4.

Hundreds	Tens	Ones	=	Standard Form
2	2	5	=	225

Page 2

5.

Hundreds	Tens	Ones	=	Standard Form
1	6	5	=	165

6.

Hundreds	Tens	Ones	=	Standard Form
3	1	3	=	313

7.

Hundreds	Tens	Ones	=	Standard Form
2	5	8	=	258

8.

Hundreds	Tens	Ones	=	Standard Form
1	5	6	=	156

Page 3

9.

Hundreds	Tens	Ones	=	Standard Form
1	1	2	=	112

10.

Hundreds	Tens	Ones	=	Standard Form
3	1	7	=	317

11.

Hundreds	Tens	Ones	=	Standard Form
3	4	8	=	348

12.

Hundreds	Tens	Ones	=	Standard Form
4	4	4	=	444

Page 4

13.

Hundreds	Tens	Ones	=	Standard Form
5	1	9	=	519

14.

Hundreds	Tens	Ones	=	Standard Form
8	3	5	=	835

15.

Hundreds	Tens	Ones	=	Standard Form
6	3	2	=	632

16.

Hundreds	Tens	Ones	=	Standard Form
6	2	7	=	627