

Print in black and white or color.

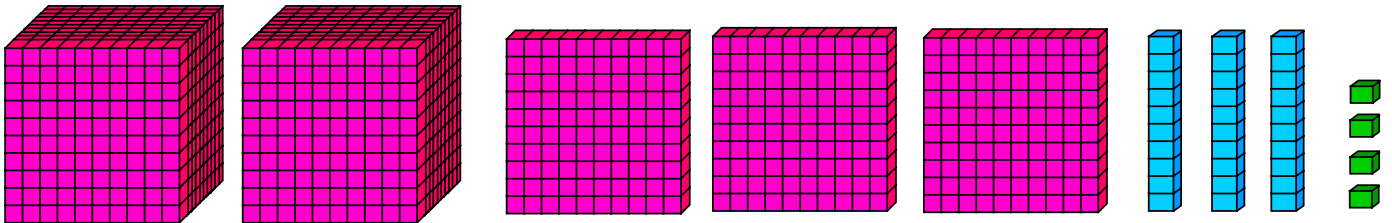
## Place Value

Skill 3 - 01E

### Thousands, Hundreds, Tens and Ones: 4-Digit Numbers

**Directions:** Count the thousands, hundreds, tens, and ones. Write each 4-digit number as thousands, hundreds, tens, and ones in the table below. Then, write the number in standard form in the box. The first one is done for you as an example.

1.



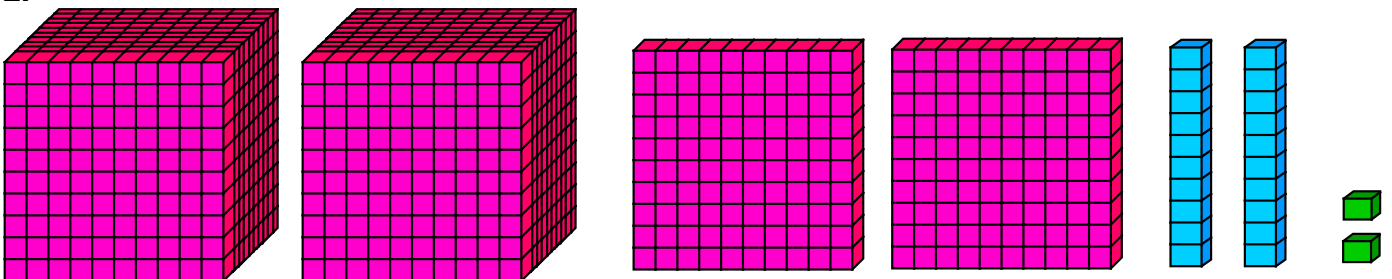
T	H	T	O
2	3	3	4

=

Standard Form
2,334

Write the number that matches the model.

2.



T	H	T	O

=

Standard Form

Write the number that matches the model.

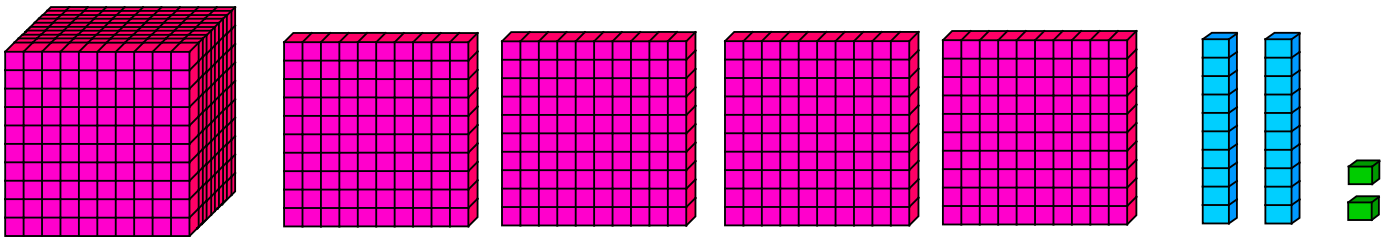
# Place Value

## Skill 3 - 01E

### Thousands, Hundreds, Tens and Ones: 4-Digit Numbers

**Directions:** Count the thousands, hundreds, tens, and ones. Write each 4-digit number as thousands, hundreds, tens, and ones in the table below. Then, write the number in standard form in the box.

3.



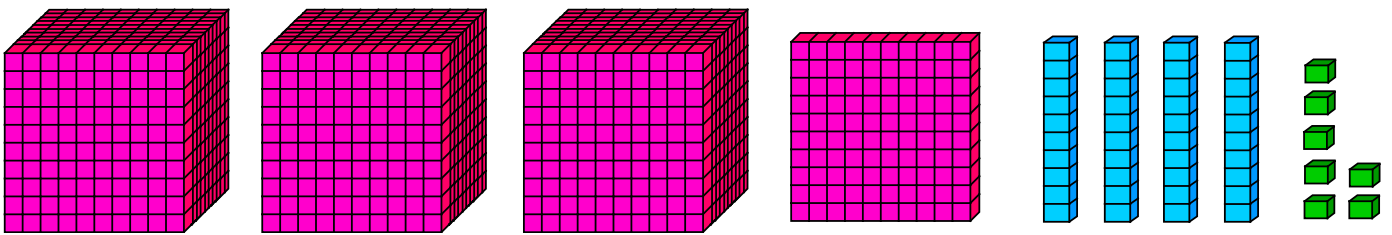
T	H	T	O

=

<b>Standard Form</b>

Write the number that matches the model.

4.



T	H	T	O

=

<b>Standard Form</b>

Write the number that matches the model.

# Place Value

## Skill 3 - 01E

### Thousands, Hundreds, Tens and Ones: 4-Digit Numbers

**Directions:** Count the thousands, hundreds, tens, and ones. Write each 4-digit number as thousands, hundreds, tens, and ones in the table below. Then, write the number in standard form in the box.

5.

T	H	T	O	=	Standard Form

Write the number that matches the model.

6.

T	H	T	O	=	Standard Form

Write the number that matches the model.

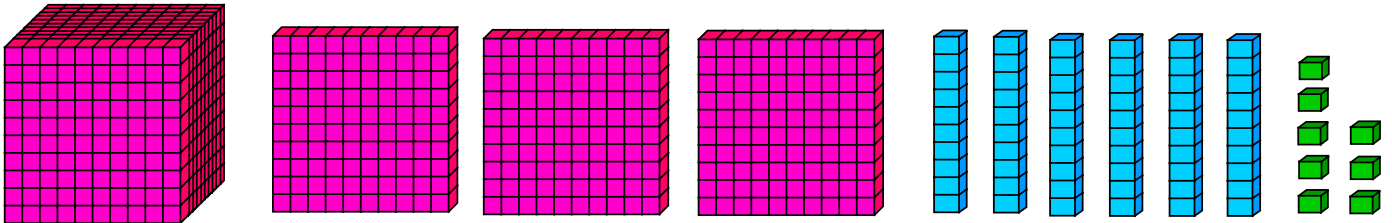
# Place Value

## Skill 3 - 01E

### Thousands, Hundreds, Tens and Ones: 4-Digit Numbers

**Directions:** Count the thousands, hundreds, tens, and ones. Write each 4-digit number as thousands, hundreds, tens, and ones in the table below. Then, write the number in standard form in the box.

7.



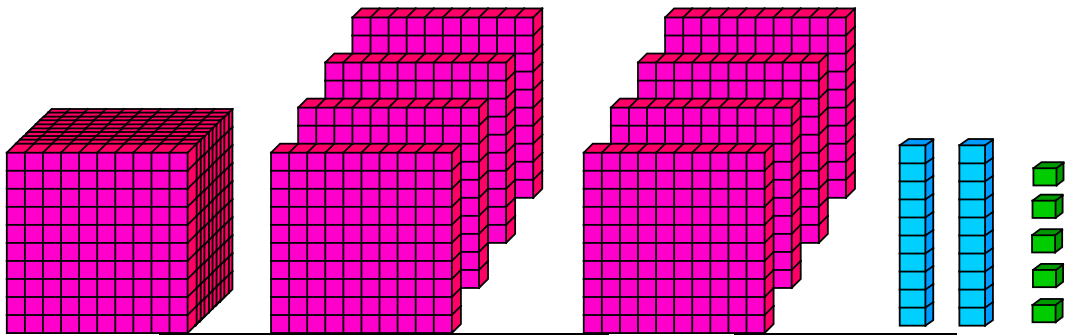
T	H	T	O

=

<b>Standard Form</b>

Write the number that matches the model.

8.



T	H	T	O

=

<b>Standard Form</b>

Write the number that matches the model.

# Place Value

## Skill 3 - 01E

### Thousands, Hundreds, Tens and Ones: 4-Digit Numbers

**Directions:** Count the thousands, hundreds, tens, and ones. Write each 4-digit number as thousands, hundreds, tens, and ones in the table below. Then, write the number in standard form in the box.

9.

T	H	T	O	=	Standard Form

Write the number that matches the model.

10.

T	H	T	O	=	Standard Form

Write the number that matches the model.

11.

T	H	T	O	=	Standard Form

Write the number that matches the model.

# Answer Key

## Skill 3 - 01E

1.

T	H	T	O
2	3	3	4

 = 

Standard Form
2,334

2.

T	H	T	O
2	2	2	2

 = 

Standard Form
2,222

3.

T	H	T	O
1	4	2	2

 = 

Standard Form
1,422

4.

T	H	T	O
3	1	4	7

 = 

Standard Form
3,147

5.

T	H	T	O
2	2	2	2

 = 

Standard Form
2,222

6.

T	H	T	O
1	4	3	5

 = 

Standard Form
1,435

7.

T	H	T	O
1	3	6	8

 = 

Standard Form
1,368

8.

T	H	T	O
1	8	2	5

 = 

Standard Form
1,825

9.

T	H	T	O
4	2	1	9

 = 

Standard Form
4,219

10.

T	H	T	O
3	3	4	6

 = 

Standard Form
3,346

11.

T	H	T	O
3	3	6	6

 = 

Standard Form
3,366

Copyright © FreeMathProgram.com All rights reserved.