

Estimating Numbers

Skill 3 - 3D

About how many?

Directions: Circle the best estimate.



This jar has 100 gumballs.
Use the number 100 as a
benchmark to estimate the
number in the next jar.



About how many
gumballs are in this
jar?

Circle the most
reasonable number.

- A. About 150 gumballs.
- B. About 200 gumballs
- C. About 400 gumballs

1.



This jar has 10 gumballs.
Use the number 10 as a
benchmark to estimate the
number in the next jar.



About how many
gumballs are in this
jar?

Circle the most
reasonable number.

- A. About 10 gumballs.
- B. About 20 gumballs
- C. About 40 gumballs

Estimating Numbers

Skill 3 - 3D

About how many?

Directions: Circle the best estimate.

2.



This jar has 50 gumballs.
Use the number 50 as a benchmark to estimate the number in the next jar.



About how many gumballs are in this jar?

Circle the most reasonable number.

- A. About 50 gumballs.
- B. About 75 gumballs
- C. About 200 gumballs

3.



This jar has 100 gumballs.
Use the number 100 as a benchmark to estimate the number in the next jar.



About how many gumballs are in this jar?

Circle the most reasonable number.

- A. About 100 gumballs.
- B. About 150 gumballs
- C. About 250 gumballs



Estimating Numbers

Skill 3 - 3D



About how many?

Directions: Circle the best estimate.



4.

| | | |
|---|--|---|
|  <p>This jar has 150 gumballs. Use the number 150 as a benchmark to estimate the number in the next jar.</p> |  <p>About how many gumballs are in this jar?</p> | <p>Circle the most reasonable number.</p> <p>A. About 200 gumballs.</p> <p>B. About 300 gumballs</p> <p>C. About 400 gumballs</p> |
|---|--|---|

5.

| | | |
|--|---|---|
|  <p>This jar has 20 gumballs. Use the number 20 as a benchmark to estimate the number in the next jar.</p> |  <p>About how many gumballs are in this jar?</p> | <p>Circle the most reasonable number.</p> <p>A. About 40 gumballs.</p> <p>B. About 80 gumballs</p> <p>C. About 150 gumballs</p> |
|--|---|---|

6.

| | | |
|---|--|---|
|  <p>This jar has 150 gumballs. Use the number 150 as a benchmark to estimate the number in the next jar.</p> |  <p>About how many gumballs are in this jar?</p> | <p>Circle the most reasonable number.</p> <p>A. About 100 gumballs.</p> <p>B. About 180 gumballs</p> <p>C. About 250 gumballs</p> |
|---|--|---|

Answer Key
Skill 3 - 3D



This jar has 100 gumballs.
Use the number 100 as a
benchmark to estimate the
number in the next jar.



About how many
gumballs are in this
jar?

Circle the most
reasonable number.

A. About 150 gumballs.

B. About 200 gumballs

C. About 400 gumballs

1. B; About 200 gumballs
2. B; About 75 gumballs
3. B; About 150 gumballs
4. A; About 200 gumballs
5. A; About 40 gumballs
6. B; About 180 gumballs