

Name \_\_\_\_\_

Date \_\_\_\_\_

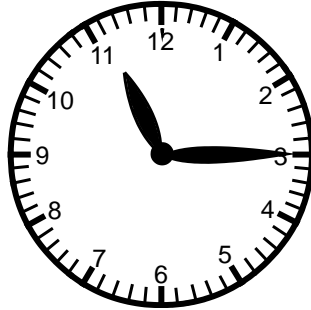
# Tell Time

## Skill 3 - 8A

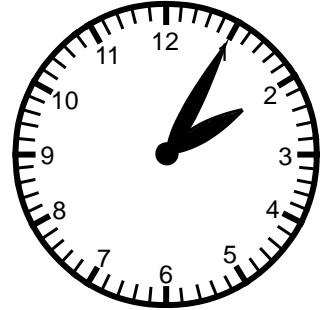
**Directions:** Write the time. The first two are done for you.



8:00




11:15




      

1.



2.



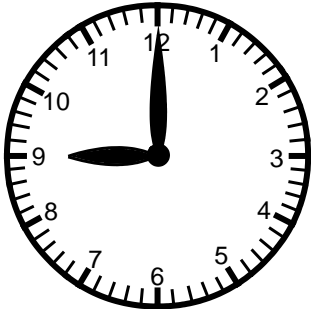
      

3.



4.



5.



6.



Name \_\_\_\_\_

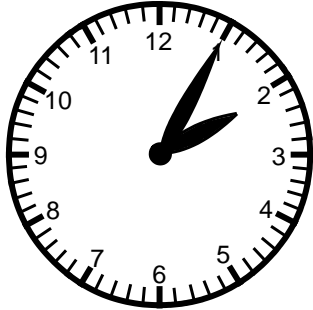
Date \_\_\_\_\_

# Tell Time

## Skill 3 - 8A

**Directions:** Write the time.

7.



\_\_\_\_\_ : \_\_\_\_\_

8.




\_\_\_\_\_ : \_\_\_\_\_

9.




\_\_\_\_\_ : \_\_\_\_\_

10.




\_\_\_\_\_ : \_\_\_\_\_

11.



\_\_\_\_\_ : \_\_\_\_\_

12.



\_\_\_\_\_ : \_\_\_\_\_

13.




\_\_\_\_\_ : \_\_\_\_\_

14.



\_\_\_\_\_ : \_\_\_\_\_

15.



\_\_\_\_\_ : \_\_\_\_\_

Name \_\_\_\_\_

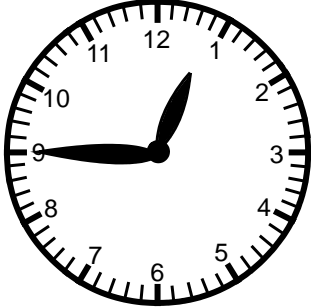
Date \_\_\_\_\_

# Tell Time

## Skill 3 - 8A

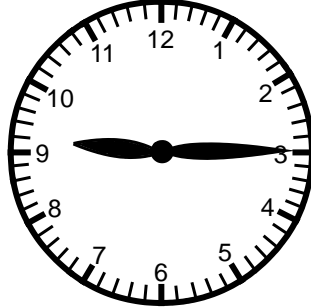
**Directions:** Write the time.

16.




\_\_\_\_\_

17.



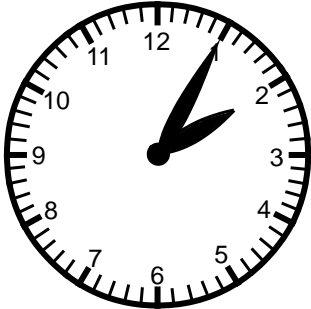
\_\_\_\_\_

18.



\_\_\_\_\_

19.



\_\_\_\_\_

20.




\_\_\_\_\_

21.



\_\_\_\_\_

22.



\_\_\_\_\_

23.



\_\_\_\_\_

24.



\_\_\_\_\_

Answer Key  
Skill 3 - 8A

1.  <u>10:15</u>	2.  <u>12:25</u>	3.  <u>10:30</u>
4.  <u>9:00</u>	5.  <u>3:00</u>	6.  <u>10:45</u>
7.  <u>2:05</u>	8.  <u>7:50</u>	9.  <u>7:35</u>
10.  <u>1:10</u>	11.  <u>3:55</u>	12.  <u>2:40</u>
13.  <u>2:20</u>	14.  <u>6:30</u>	15.  <u>9:05</u>
16.  <u>12:45</u>	17.  <u>9:15</u>	18.  <u>5:10</u>
19.  <u>2:05</u>	20.  <u>3:35</u>	21.  <u>10:25</u>
2.  <u>7:20</u>	23.  <u>4:50</u>	24.  <u>6:40</u>

Copyright © FreeMathProgram.com All rights reserved.