

# Geometric Figures


## Skill 3 - 23A

### 3-Dimensional Figures

Below are common objects. Draw a line or write the name of the 3-dimensional figure that describes the common object.



Choose from the following list:

sphere, cube, cylinder, cone, rectangular prism, square pyramid



1.

2.

Name this figure and then draw a picture of the figure.		Name this figure and then draw a picture of the figure.	
 <p>Write the name of the 3-dimensional figure here.</p> <p>_____</p>	Draw the figure here.	 <p>Write the name of the 3-dimensional figure here.</p> <p>_____</p>	Draw the figure here.

Name \_\_\_\_\_

Date \_\_\_\_\_

# Geometric Figures

## Skill 3 - 23A

### 3-Dimensional Figures

3.

Name this figure and then draw a picture of the figure.



Draw the figure here.

Write the name of the 3-dimensional figure here.

\_\_\_\_\_

4.

Name this figure and then draw a picture of the figure.



Draw the figure here.

Write the name of the 3-dimensional figure here.

\_\_\_\_\_

5.

Name this figure and then draw a picture of the figure.



Draw the figure here.

Write the name of the 3-dimensional figure here.

\_\_\_\_\_

6.

Name this figure and then draw a picture of the figure.




Draw the figure here.

Write the name of the 3-dimensional figure here.

\_\_\_\_\_

Answer Key  
Skill 3 - 23A



cylinder

cone

sphere

cube

square  
pyramid

rectangular  
prism

Copyright © FreeMathProgram.com All rights reserved.