

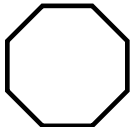
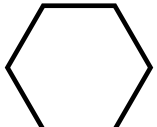

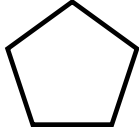
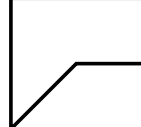
# Geometric Figures

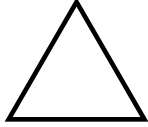

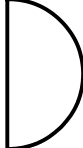

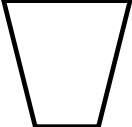
## Skill 3 - 23C

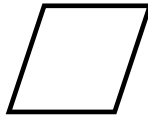

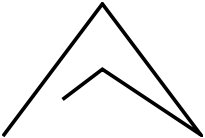
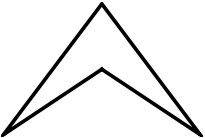
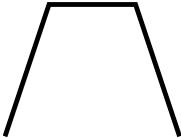
### 2-Dimensional Figures: Polygons

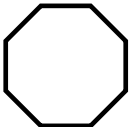


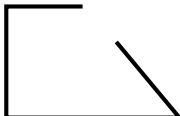
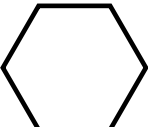
**Directions:** Write "yes" if the figure is a polygon. Write "no" if the figure is not a polygon. Some of the problems are done for you.

A polygon is a closed figure with 3 or more straight sides.

1.  yes	2. 	3.  no	4. 	5.  no
--	---	---	---	---

6. 	7. 	8. 	9. 	10. 
---	---	---	--	--

11. 	12. 	13. 	14. 	15. 
--	--	--	---	--

16. 	17. 	18. 	19. 	20. 
--	--	--	---	--

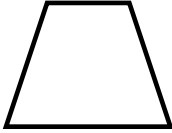



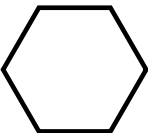
# Geometric Figures

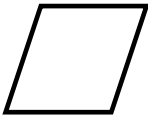


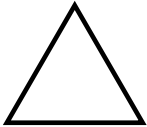
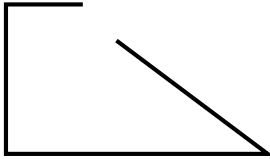
## Skill 3 - 23C



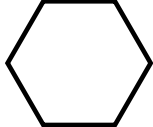


### 2-Dimensional Figures: Polygons


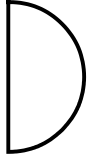
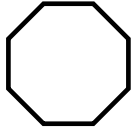

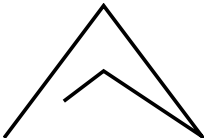
**Directions:** Write yes if the figure is a polygon. Write no if the figure is not a polygon.

A polygon is a closed figure with 3 or more straight sides.

<b>21.</b>	<b>22.</b>	<b>23.</b>	<b>24.</b>	<b>25.</b>
				

<b>26.</b>	<b>27.</b>	<b>28.</b>	<b>29.</b>	<b>30.</b>
				

<b>31.</b>	<b>32.</b>	<b>33.</b>	<b>34.</b>	<b>35.</b>
				

<b>36.</b>	<b>37.</b>	<b>38.</b>	<b>39.</b>	<b>40.</b>
				

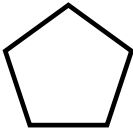
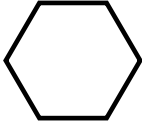
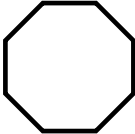
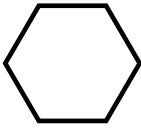
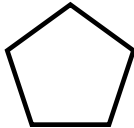
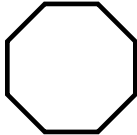
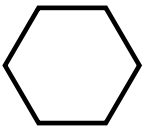
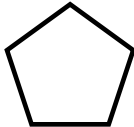
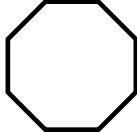
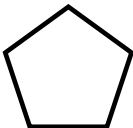
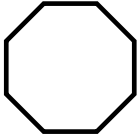
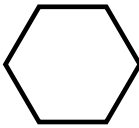
# Geometric Figures

## Skill 3 - 23C

### 2-Dimensional Figures: Polygons

**Directions:** Look at each polygon and write the number of sides and angles like the examples below.

A polygon is a closed figure with 3 or more straight sides.

41.  pentagon 5 sides and 5 angles	42.  hexagon 6 sides and 6 angles	43.  octagon 8 sides and 8 angles
44.  hexagon	45.  pentagon	46.  octagon
47.  hexagon	48.  pentagon	49.  octagon
50.  pentagon	51.  octagon	52.  hexagon

Answer Key  
Skill 3 - 23C

1. yes	2. yes	3. no	4. yes	5. no
6. yes	7. no	8. no	9. yes	10. yes
11. yes	12. no	13. no	14. yes	15. no
16. yes	17. yes	18. no	19. no	20. yes
21. yes	22. no	23. yes	24. no	25. yes
26. yes	27. yes	28. no	29. yes	30. no
31. no	32. no	33. yes	34. yes	35. no
36. no	37. no	38. yes	39. yes	40. no
41. pentagon 5 sides and 5 angles	42. hexagon 6 sides and 6 angles	43. octagon 8 sides and 8 angles		
44. hexagon 6 sides and 6 angles	45. pentagon 5 sides and 5 angles	46. octagon 8 sides and 8 angles		
47. hexagon 6 sides and 6 angles	48. pentagon 5 sides and 5 angles	49. octagon 8 sides and 8 angles		
50. pentagon 5 sides and 5 angles	51. octagon 8 sides and 8 angles	52. hexagon 6 sides and 6 angles		

Copyright © FreeMathProgram.com All rights reserved.