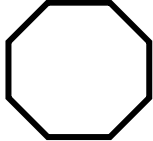
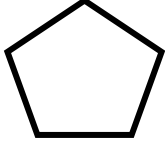
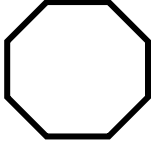
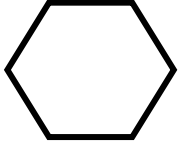
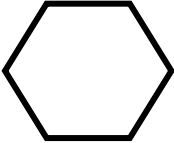
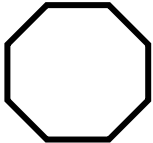
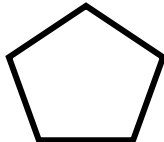
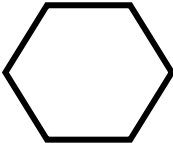
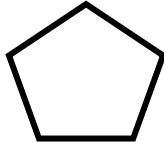
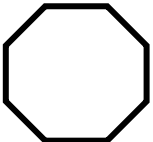
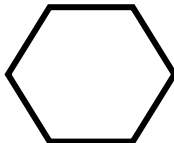
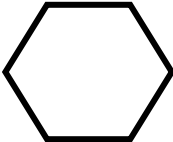


Geometric Figures

Skill 3 - 23D

2-Dimensional Figures: Polygons

Directions: Circle the correct answer. Identify each polygon as a pentagon, hexagon or octagon. Write the number of sides and angles like the example below. Number 1 is done for you.

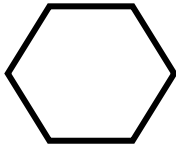
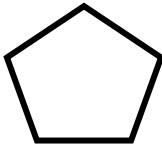
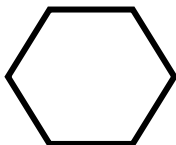
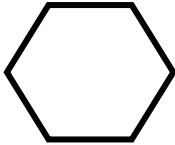
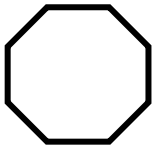
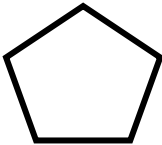
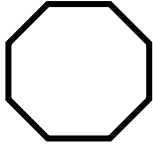
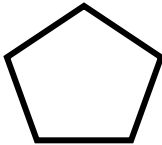
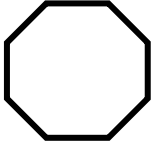
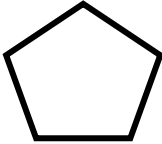
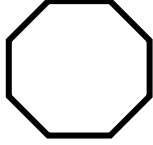
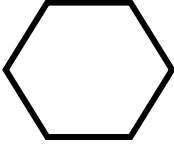
<p>1.</p>  <p>8 sides and 8 angles</p> <p>pentagon hexagon octagon</p>	<p>2.</p>  <p>pentagon hexagon octagon</p>	<p>3.</p>  <p>pentagon hexagon octagon</p>	<p>4.</p>  <p>pentagon hexagon octagon</p>
<p>5.</p>  <p>pentagon hexagon octagon</p>	<p>6.</p>  <p>pentagon hexagon octagon</p>	<p>7.</p>  <p>pentagon hexagon octagon</p>	<p>8.</p>  <p>pentagon hexagon octagon</p>
<p>9.</p>  <p>pentagon hexagon octagon</p>	<p>10.</p>  <p>pentagon hexagon octagon</p>	<p>11.</p>  <p>pentagon hexagon octagon</p>	<p>12.</p>  <p>pentagon hexagon octagon</p>

Geometric Figures

Skill 3 - 23D

2-Dimensional Figures: Polygons

Directions: Circle the correct answer. Identify each polygon as a pentagon, hexagon or octagon. Write the number of sides and angles like the example (number 13) below.

<p>13.</p>  <p>6 sides and 6 angles pentagon hexagon octagon</p>	<p>14.</p>  <p>pentagon hexagon octagon</p>	<p>15.</p>  <p>pentagon hexagon octagon</p>	<p>16.</p>  <p>pentagon hexagon octagon</p>
<p>17.</p>  <p>pentagon hexagon octagon</p>	<p>18.</p>  <p>pentagon hexagon octagon</p>	<p>19.</p>  <p>pentagon hexagon octagon</p>	<p>20.</p>  <p>pentagon hexagon octagon</p>
<p>21.</p>  <p>pentagon hexagon octagon</p>	<p>22.</p>  <p>pentagon hexagon octagon</p>	<p>23.</p>  <p>pentagon hexagon octagon</p>	<p>24.</p>  <p>pentagon hexagon octagon</p>

Answer Key
Skill 3 - 23D

1. pentagon hexagon octagon	2. pentagon hexagon octagon	3. pentagon hexagon octagon	4. pentagon hexagon octagon
5. pentagon hexagon octagon	6. pentagon hexagon octagon	7. pentagon hexagon octagon	8. pentagon hexagon octagon
9. pentagon hexagon octagon	10. pentagon hexagon octagon	11. pentagon hexagon octagon	12. pentagon hexagon octagon
13. pentagon hexagon octagon	14. pentagon hexagon octagon	15. pentagon hexagon octagon	16. pentagon hexagon octagon
17. pentagon hexagon octagon	18. pentagon hexagon octagon	19. pentagon hexagon octagon	20. pentagon hexagon octagon
21. pentagon hexagon octagon	22. pentagon hexagon octagon	23. pentagon hexagon octagon	24. pentagon hexagon octagon