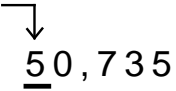
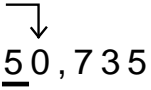


Round Numbers

Skill 4 - 2F

Examples

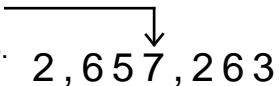
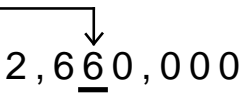
Round 50,735 to the nearest ten thousand.

<p>1. Find the place that you want to round to and underline it.</p> <p>The digit that the arrow is pointing to is in the ten thousands place. We have underlined this digit. This is the place that we want to round to.</p> <p style="text-align: right;">  </p>	<p>2. Now that you have underlined the digit that you want to round to.</p> <p><u>Follow these rules.</u></p> <p>If the digit to the right of the underlined digit (the thousands place) is less than 5, the underlined digit stays the same.</p> <p>If the digit to the right of the underlined digit is 5 or more, the underlined digit increases by 1.</p> <p>Change all of the digits to the right of the underlined digit to zeros.</p>
<p>3. The digit to the right of the underlined digit is zero. Since zero is less than 5, the underlined digit stays the same.</p> <p style="text-align: right;">  </p>	<p>4. Change all of the digits to the right of the underlined digit to zeros.</p> <p style="text-align: center;"><u>50,000</u></p>

So, 50,735 rounded to the nearest ten thousand is 50,000.

Round 2,657,263 to the nearest ten thousand.

Find the place that you want to round to and underline it. 2,657,263

<p>The number to the right of the underlined digit is greater than 5.</p> <p style="text-align: right;">  </p>	<p>So, increase the underlined digit by 1 and change all of the digits to the right of the underlined digit to zeros.</p> <p style="text-align: right;">  </p>
---	---

Directions: Round the numbers to the nearest ten thousand.

<p>1. 56,325</p> <p>_____</p>	<p>2. 173,534</p> <p>_____</p>
--	---

Round Numbers

Skill 4 - 2F

Directions: Round the numbers to the nearest ten thousand.

3. 135,225 _____	4. 573,482 _____	5. 242,781 _____
6. 26,682 _____	7. 1,321,165 _____	8. 215,452 _____
9. 828,695 _____	10. 759,877 _____	11. 72,326 _____
12. 82,165 _____	13. 22,125 _____	14. 67,550 _____
15. 28,352 _____	16. 255,497 _____	17. 528,346 _____
18. 25,364 _____	19. 521,826 _____	20. 284,516 _____
21. 321,165 _____	22. 625,352 _____	23. 19,500 _____

Round Numbers

Skill 4 - 2F

Directions: Round the numbers to the nearest ten thousand.

24. 189,950 _____	25. 65,174 _____	26. 52,533 _____
27. 73,220 _____	28. 15,150 _____	29. 22,214 _____
30. 35,484 _____	31. 348,615 _____	32. 64,238 _____
33. 377,286 _____	34. 4,684,474 _____	35. 275,414 _____
36. 123,258 _____	37. 44,145 _____	38. 61,251 _____
39. 25,357 _____	40. 32,115 _____	41. 72,618 _____
42. 18,345 _____	43. 739,487 _____	44. 645,798 _____

Answer Key
Skill 4-2F

Directions: Round the numbers to the nearest ten thousand.

Pg 1

1. 56,325 60,000

2. 173,534 170,000

Pg 2

3. 135,225 140,000 4. 573,482 570,000 5. 242,781 240,000

6. 26,682 30,000 7. 1,321,165 1,320,000 8. 215,452 220,000

9. 828,695 830,000 10. 759,877 760,000 11. 72,326 70,000

12. 82,165 80,000 13. 22,125 20,000 14. 67,550 70,000

15. 28,352 30,000 16. 255,497 260,000 17. 528,346 530,000

18. 25,364 30,000 19. 521,826 520,000 20. 284,516 280,000

21. 321,165 320,000 22. 625,352 630,000 23. 19,500 20,000

Pg 3

24. 189,950 190,000 25. 65,174 70,000 26. 52,533 50,000

27. 73,220 70,000 28. 15,150 20,000 29. 22,214 20,000

30. 35,484 40,000 31. 348,615 350,000 32. 64,238 60,000

33. 377,286 380,000 34. 4,684,474 4,680,000 35. 275,414 280,000

36. 123,258 120,000 37. 44,145 40,000 38. 61,251 60,000

39. 25,357 30,000 40. 32,115 30,000 41. 72,618 70,000

42. 18,345 20,000 43. 739,487 30,000 44. 645,798 650,000