

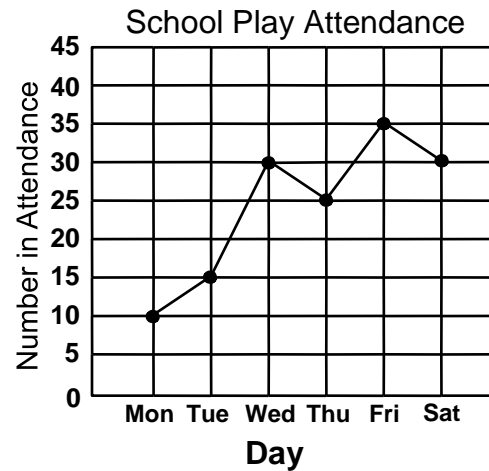
Line Graphs

Skill 4 - 5G

Make a Line Graph

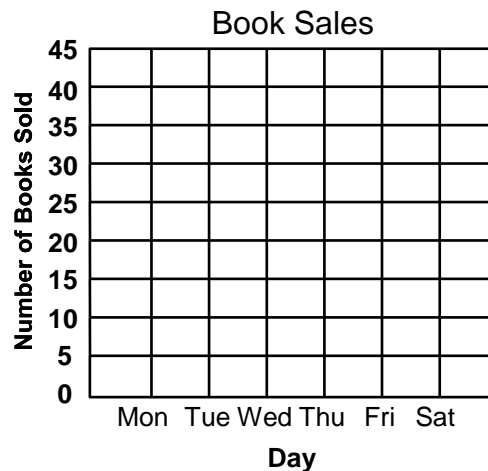
1. Plot each point on the graph from the data in the table.
2. Connect the points with a line from left to right as shown in this example.

School Play	
Day	Attendance
Monday	10
Tuesday	15
Wednesday	30
Thursday	25
Friday	35
Saturday	30



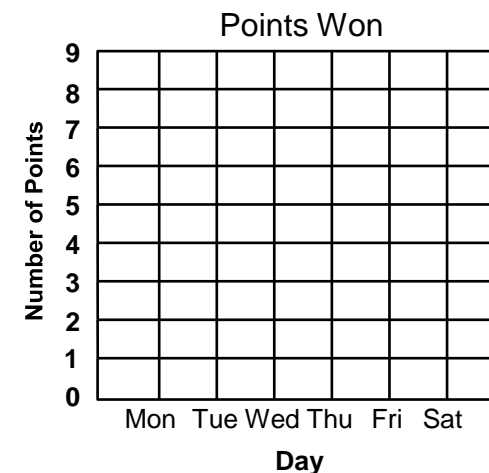
2. Use the data in the table to complete the line graph.

Book Sales	
Day	Sales
Monday	25
Tuesday	40
Wednesday	15
Thursday	35
Friday	20
Saturday	30



3. Use the data in the table to complete the line graph.

Points Won	
Day	Points
Monday	6
Tuesday	4
Wednesday	8
Thursday	2
Friday	7
Saturday	5



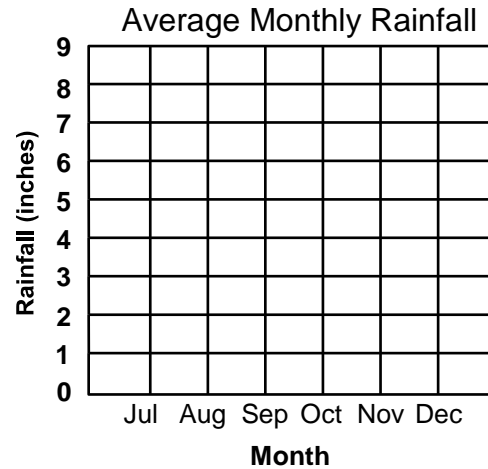
Line Graphs

Skill 4 - 5G

Make a Line Graph

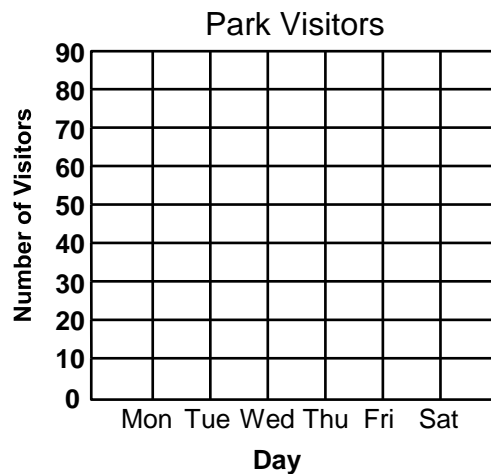
4. Use the data in the table to complete the line graph.

Average Monthly Rainfall (inches)	
Month	Rainfall
July	8
August	6
September	7
October	3
November	5
December	2



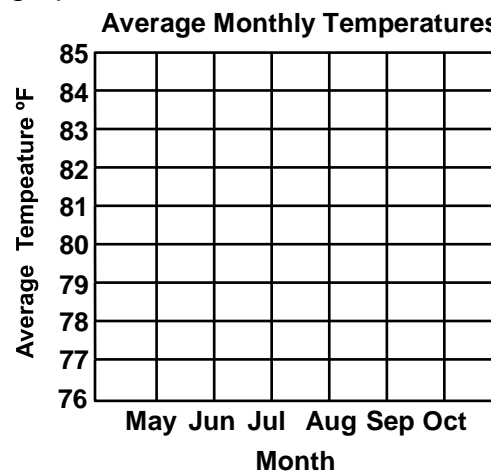
5. Use the data in the table to complete the line graph.

Park Visitors	
Day	Attendance
Monday	20
Tuesday	70
Wednesday	50
Thursday	10
Friday	70
Saturday	80



6. Use the data in the table to complete the line graph.

Average Temperatures	
Month	Temperature °F
May	77
June	81
July	84
August	82
September	81
October	79



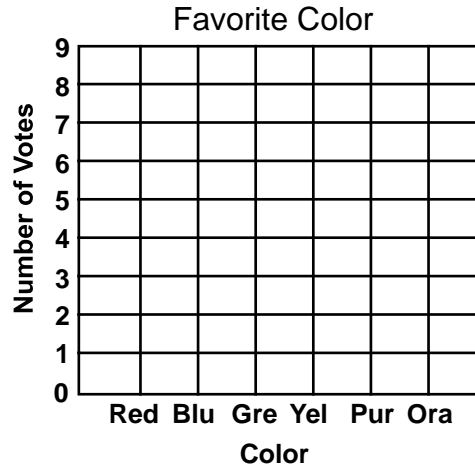
Line Graphs

Skill 4 - 5G

Make a Line Graph


7. Use the data in the table to complete the line graph.

Favorite Color	
Color	Votes
Red	5
Blue	8
Green	7
Yellow	3
Purple	6
Orange	4



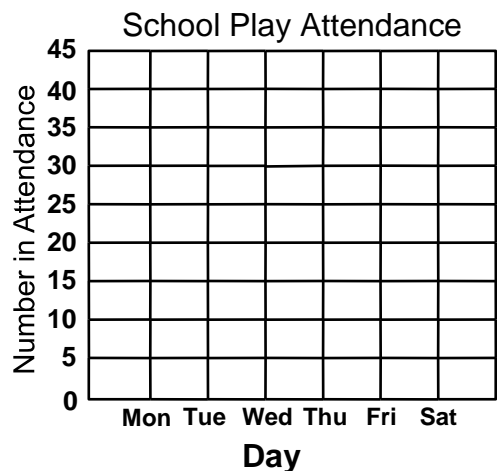
8. Use the data in the table to complete the line graph.

Tickets Sold	
Student	Number
Jay	30
Sue	10
Lou	40
Ann	35
Joe	20
Mike	5



9. Use the data in the table to complete the line graph.

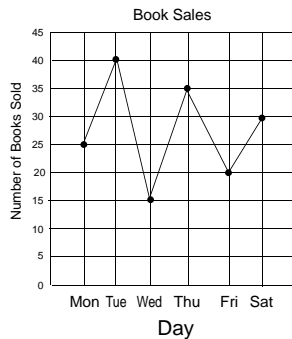
School Play	
Day	Attendance
Monday	35
Tuesday	20
Wednesday	10
Thursday	15
Friday	45
Saturday	40



Answer Key
Skill 4 - 5G

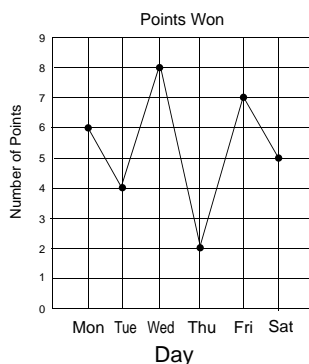
Page 1 Graph 2. Use the data in the table to complete the line graph.

Book Sales	
Day	Sales
Monday	25
Tuesday	40
Wednesday	15
Thursday	35
Friday	20
Saturday	30



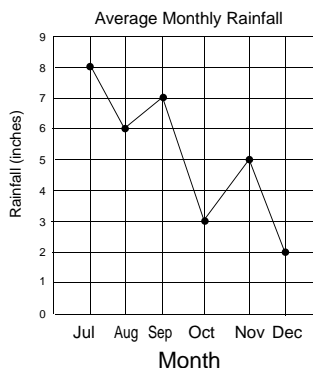
Graph 3

Points Won	
Day	Points
Monday	6
Tuesday	4
Wednesday	8
Thursday	2
Friday	7
Saturday	5



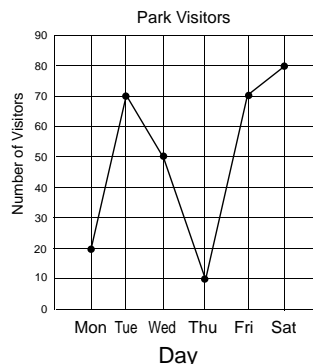
Page 2 Graph 4

Average Monthly Rainfall (inches)	
Month	Rainfall
July	8
August	6
September	7
October	3
November	5
December	2



Graph 5

Park Visitors	
Day	Attendance
Monday	20
Tuesday	70
Wednesday	50
Thursday	10
Friday	70
Saturday	80

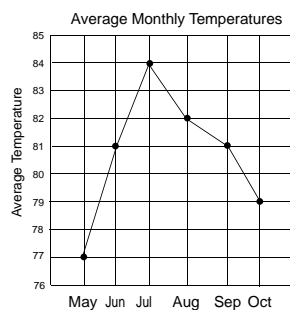


Answer Key

Skill 4 - 5G

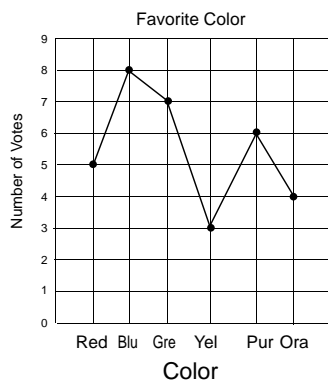
Page 2 Graph 6

Average Temperatures	
Month	Temperature °F
May	77
June	81
July	84
August	82
September	81
October	79



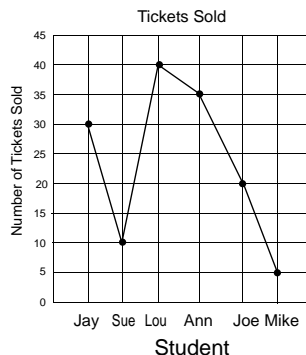
Page 3 Graph 7

Favorite Color	
Color	Votes
Red	5
Blue	8
Green	7
Yellow	3
Purple	6
Orange	4



Graph 8

Tickets Sold	
Student	Number
Jay	30
Sue	10
Lou	40
Ann	35
Joe	20
Mike	5



Graph 9

School Play	
Day	Attendance
Monday	35
Tuesday	20
Wednesday	10
Thursday	15
Friday	45
Saturday	40

