


Decimals: Skill 4 - 27E

Decimals

Carla is practicing her basketball skills. From a line on the court, she made 100 tries to make a basket. Of the 100 tries, 28 shots went in the hoop. Write her number of successful shots out of the total number of tries as a fraction and as a decimal to the hundredths place.

The model shows the number of shots that went in the hoop out of the total number of tries.




The fraction below shows the model. Out of 100 attempts, 28 shots went in the hoop.

parts shaded \rightarrow 28 \leftarrow shots made

total equal parts \rightarrow 100 \leftarrow shots attempted

You can write a decimal for a fraction.



The model shows the fraction $\frac{28}{100}$.

$\frac{28}{100}$ written as a decimal is 0.28

This is the decimal 0.28 in a place value chart.

Ones		Tenths	Hundredths
0	.	2	8

1. Jason took a test with 100 questions. He got 84 of the answers correct. Write the number of correct answers as a fraction and as a decimal to the hundredths place.

2. In music class, $\frac{6}{10}$ of the students play stringed instruments. Write $\frac{6}{10}$ as a decimal.


Decimals: Skill 4 - 27E**Decimals**

3. Karen spent \$0.89 for a pen. Write \$0.89 as a fraction.
4. Janice made 36 out of 100 basketball shots that she attempted. Write her score as a fraction and as a decimal to the hundredths place.
5. Barbara got 50 hits out of 100 times at bat for her softball team. Write her number of hits as a decimal to the hundredths place and as a fraction in simplest form.
6. Tom walked 0.5 miles to school. Write 0.5 as a fraction.
7. One "mil" is $\frac{1}{1,000}$ of an inch. Write $\frac{1}{1,000}$ as a decimal.
8. Marissa wrote 0.04 as the fraction $\frac{1}{25}$. Is she correct? Explain your answer.
9. Juan wrote 0.029 as the fraction $\frac{29}{1,000}$. Is he correct? Explain your answer.

Decimals: Skill 4 - 27E**Decimals**

10. Darlene thinks that 0.50 equals $\frac{1}{2}$. Is she correct? Explain your answer.

11.



Write the decimal that the model shows.

12. Write four and seven thousandths as a decimal number. Write two and forty-seven hundredths as a decimal number.

13. Which digit is in the tenths place, 3.251?

Which digit is in the thousandths place, 4.103?

14. Which decimal is equivalent to 0.6500? a. 0.6 b. 0.650 c. 0.60 d. 0.7

15. Round 5.25 to the nearest tenth.

Round 4.5 to the nearest whole number.

Round 6.3 to the nearest whole number.

16. Michael completed $\frac{3}{4}$ of his homework. What decimal is equivalent to $\frac{3}{4}$?

Answer Key: 27E: Grade 4

1. $\frac{84}{100} = 0.84$

2. $\frac{6}{10} = 0.6$

3. $\frac{89}{100}$

4. $\frac{36}{100} = 0.36$

5. $0.50 = \frac{50}{100}$ or $\frac{1}{2}$

6. $0.5 = \frac{5}{10}$ or $\frac{1}{2}$

7. $\frac{1}{1,000} = 0.001$

8. yes, $0.04 = \frac{4}{100}$ and $\frac{4}{100}$ in simplest form is $\frac{1}{25}$

9. yes, $\frac{29}{1,000} =$

Ones		Tenths	Hundredths	Thousandths
0	.	0	2	9

10. yes, $0.50 = \frac{50}{100}$ and $\frac{50}{100} = \frac{1}{2}$

11. 0.38

12. 4.007, 2.47

13. 2, 3

14. **b.** 0.650

15. 5.3, 5, 6

16. $\frac{3}{4} = \frac{75}{100}$ $\frac{75}{100} = 0.75$