

Print in black and white or color.

Graph Data: Skill 5 - 27D

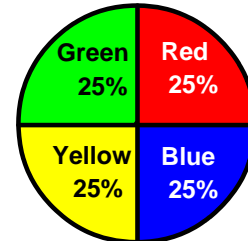
**Circle Graphs**

test question answer is  $0.25 \times 180 = 45$

1. Tom counted each marble in his collection and put the marbles into groups by color. He put the data in this circle graph. Use the graph to answer the questions.

- If Tom's collection has 180 marbles in all, how many marbles are red?
- What fraction of his marble collection is green?
- What fraction of his marble collection is green and yellow?

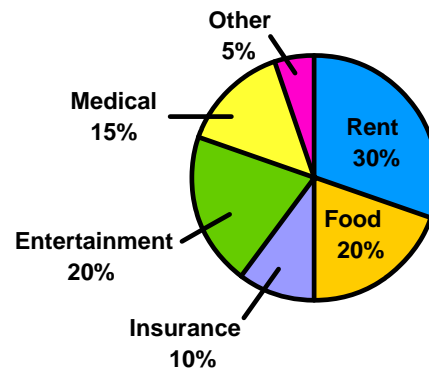
**Tom's Marble Collection Colors**



2. The circle graph below shows how Mr. Cole's monthly income is spent.

- Which expense requires the greatest portion of Mr. Cole's income?
- What percentage of Mr. Cole's income is spent on food?
- Which two expenses equal half of all his expenses?
- What percentage of his income is spent on food and medical expenses?

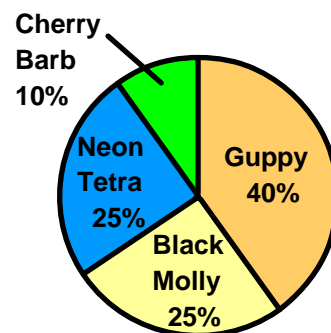
**Mr. Cole's Expenses**



3. Maria counted the fish in her aquarium and made this circle graph to show the data.

- If Maria has 160 fish in all, how many fish are cherry barbs?
- If there are 160 fish in all, how many fish are black mollies and guppies?
- Which group has more fish?
  - neon tetras and black mollies
  - cherry barbs and guppies
  - neither, the two groups are equal.

**Maria's Aquarium Fish**



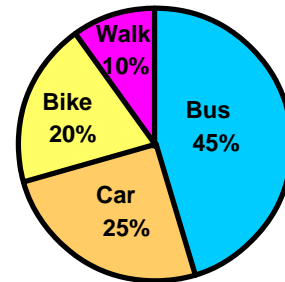
## Graph Data: Skill 5 - 27D

## Circle Graphs

4. A principal at an elementary school surveyed her students to find out how each student commutes to school each day. The data is shown in this circle graph.

- How do most students commute to school?
- If there are 1,000 students in the survey in all, how many walk to school?
- What percentage of students commute to school in a car or bus?
- If there are 1,000 students in the survey in all, how many students commute on a bus?

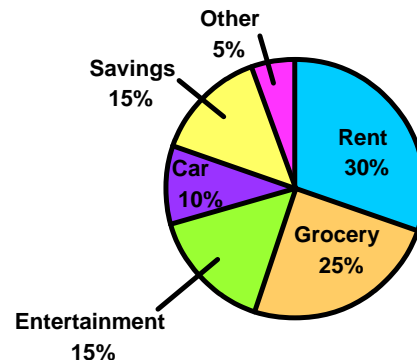
How Students Commute to School



5. The circle graph below shows how Ms Grayson's monthly income is spent.

- What fraction of her income is spent on groceries?
- What fraction of her income is spent on her car?
- If Ms Grayson earns \$4,000 per month, how much does she spend on her car?
- If Ms Grayson earns \$4,000 per month, how much does she spend on "other" expenses?

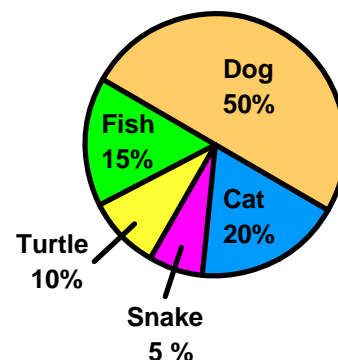
Ms Grayson's Monthly Expenses



6.

- What fraction of the total vote was for a dog as the favorite pet?
- If 360 students voted, how many students voted for fish?
- If 180 students voted, how many students voted for cats?
- If 160 students voted, how many students voted for a snake?

Favorite Pet



## Graph Data: Skill 5 - 27D

## Circle Graphs

**Directions:** Make a circle graph using the data. The first one is done for you.

1. The table shows the results of a student survey about favorite kinds of pets.

Pet	Percent of Total Votes
Dog	40%
Cat	20%
Parakeet	30%
Lizard	10%

## Step 1

Multiply each percent by  $360^\circ$  to find each angle to draw in the circle graph.

$$\text{Dog} \quad 0.40 \times 360^\circ = 144^\circ$$

$$\text{Cat} \quad 0.20 \times 360^\circ = 72^\circ$$

$$\text{Parakeet} \quad 0.30 \times 360^\circ = 108^\circ$$

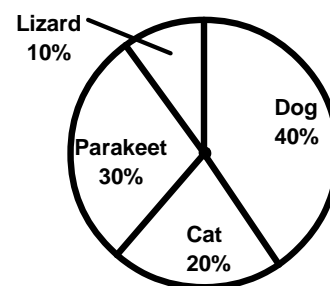
$$\text{Lizard} \quad 0.10 \times 360^\circ = 36^\circ$$

## Step 2

Use your protractor to draw each angle from step 1.

Label each section and label the circle graph with the title, "Favorite Pet".


Complete the circle graph as shown.



**Favorite Pet**


2. The table shows the results of a student survey about favorite kinds of sports.

Sport	Percent of Total Votes
Football	30%
Baseball	10%
Soccer	50%
Swimming	10%



3. The table shows the results of a student survey about favorite kinds of snacks.

Snack	Percent of Total Votes
Chips	10%
Apple	40%
Carrot	30%
Orange	20%



Answer Key Skill 5 - 27D

**Question 1**

<p>a. If Tom's collection has 180 marbles in all, how many marbles are red?</p> <p><math>0.25 \times 180 = 45</math></p>	<p>b. What fraction of his marble collection is green?</p> <p><math>\frac{25}{100} = \frac{1}{4}</math></p>	<p>c. What fraction of his marble collection is green and yellow?</p> <p><math>\frac{50}{100} = \frac{1}{2}</math></p>
--	---	--

**Question 2**

<p>a. Which expense requires the greatest portion of Mr. Cole's income?</p> <p>rent</p>	<p>b. What percentage of Mr. Cole's income is spent on food?</p> <p>20%</p>	<p>c. Which two expenses equal half of all his expenses?</p> <p>rent and food</p>	<p>d. What percentage of his income is spent on food and medical expenses?</p> <p><math>20\% + 15\% = 35\%</math></p>
---	---	---	---

**Question 3**

<p>a. If Maria has 160 fish in all, how many fish are cherry barbs?</p> <p><math>0.1 \times 160 = 16</math></p>	<p>b. If there are 160 fish in all, how many fish are black mollies and guppies?</p> <p><math>25\% + 40\% = 65\%</math> <math>0.65 \times 160 = 104</math></p>	<p>c. Which group has more fish?</p> <p>1. neon tetras and black mollies 2. cherry barbs and guppies 3. neither, the two groups are equal.</p> <p>neither, the two groups are equal</p>
---	--	---

**Question 4**

<p>a. How do most students commute to school?</p> <p>bus</p>	<p>b. If there are 1,000 students in the survey in all, how many walk to school?</p> <p><math>0.1 \times 1,000 = 100</math></p>	<p>c. What percentage of students commute to school in a car or bus?</p> <p><math>25\% + 45\% = 70\%</math></p>	<p>d. If there are 1,000 students in the survey in all, how many students commute on a bus?</p> <p><math>0.45 \times 1,000 = 450</math></p>
--	---	---	---

**Question 5**

<p>a. What fraction of her income is spent on groceries?</p> <p><math>0.25 = \frac{25}{100} = \frac{1}{4}</math></p>	<p>b. What fraction of her income is spent on her car?</p> <p><math>0.1 = \frac{10}{100} = \frac{1}{10}</math></p>	<p>c. If Ms Grayson earns \$4,000 per month, how much does she spend on her car?</p> <p><math>0.1 \times \\$4000 = 400</math></p>	<p>d. If Ms Grayson earns \$4,000 per month, how much does she spend on "other" expenses?</p> <p><math>0.05 \times 4000 = 200</math></p>
--	--	---	--

**Question 6**

<p>a. What fraction of the total vote was for a dog as the favorite pet?</p> <p><math>0.5 = \frac{50}{100} = \frac{1}{2}</math></p>	<p>b. If 360 students voted, how many students voted for fish?</p> <p><math>0.15 \times 360 = 54</math></p>	<p>c. If 180 students voted, how many students voted for cats?</p> <p><math>0.2 \times 180 = 36</math></p>	<p>d. If 160 students voted, how many students voted for a snake?</p> <p><math>0.05 \times 160 = 8</math></p>
---	---	--	---